

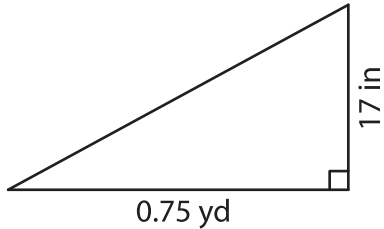
Name : _____

T2S1

Area of a Triangle

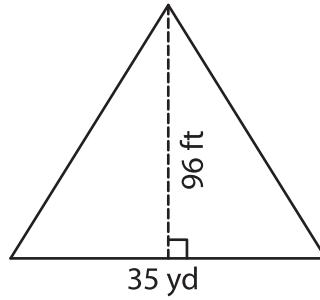
A) Find the area of each triangle.

1)



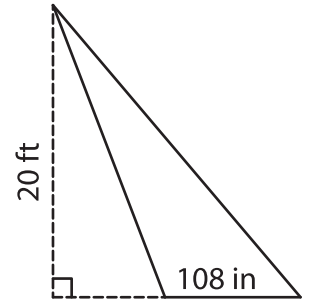
Area = _____

2)



Area = _____ ft²

3)



B) Find the area of each triangle.

4) base = 18 ft , height = 7

Area = _____

6) base = 180 in , height =

Area = _____

8) Find the area of a triangle

_____ square feet

9) The height and base of a triangle are 31 inches and 4 feet respectively. Determine the area of the triangle.

_____ square inches

PREVIEW

Gain complete access to the largest collection of worksheets in all subjects!

Members, please log in to download this worksheet.

Not a member? Please sign up to gain complete access.

www.mathworksheets4kids.com