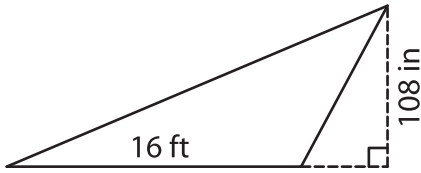


Name : \_\_\_\_\_

## Area of a Triangle

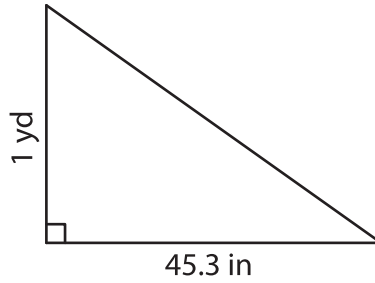
A) Find the area of each triangle.

1)



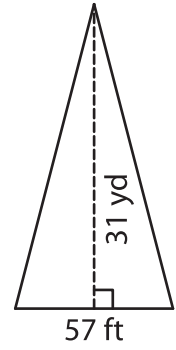
Area = \_\_\_\_\_

2)



Area = \_\_\_\_\_ yd<sup>2</sup>

3)



B) Find the area of each triangle.

4) base = 99.3 ft , height = \_\_\_\_\_

Area = \_\_\_\_\_

6) base = 12 in , height = 4 \_\_\_\_\_

Area = \_\_\_\_\_

8) Determine the area of a triangle with a base of 10 inches and a height of 28 yards respectively.

\_\_\_\_\_ square yards

9) A triangle has a height of 1.3 yards and a base of 46 feet. What is the area of the triangle?

\_\_\_\_\_ square feet

**PREVIEW**

Gain complete access to the largest collection of worksheets in all subjects!

Members, please log in to download this worksheet.

Not a member? Please sign up to gain complete access.

[www.mathworksheets4kids.com](http://www.mathworksheets4kids.com)