

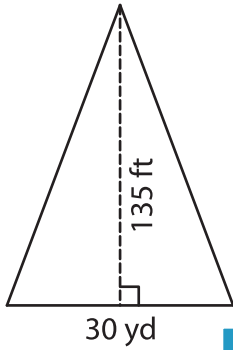
Name : _____

T2S3

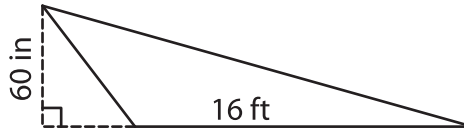
Area of a Triangle

A) Find the area of each triangle.

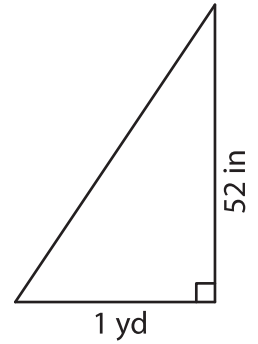
1)



2)



3)



B) Find the area of each triangle.

4) base = 2 yd , height = 1

Area = _____

6) base = 18 ft , height = 1

Area = _____

8) What is the area of a triangle

_____ square inches

9) The base and height of a triangle are 9 yards and 540 inches respectively. Find the area of the triangle.

_____ square yards

PREVIEW

Gain complete access to the largest collection of worksheets in all subjects!

Members, please log in to download this worksheet.

Not a member? Please sign up to gain complete access.

www.mathworksheets4kids.com