

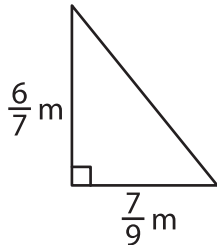
Name : _____

T2S3

Area of a Triangle

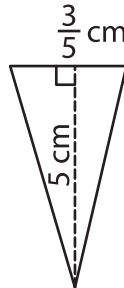
A) Find the area of each triangle.

1)



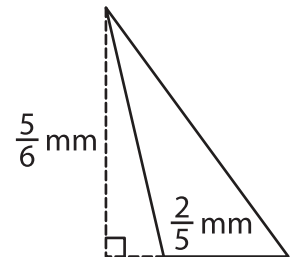
Area = _____

2)



Area = _____

3)



B) Find the area of each triangle.

4) base = $\frac{16}{9}$ cm, height = _____

Area = _____

6) base = $10\frac{5}{6}$ mm, height = _____

Area = _____

8) Determine the area of the triangle with base _____

_____ m and $1\frac{1}{15}$ cm respectively.

PREVIEW

Gain complete access to the largest collection of worksheets in all subjects!

Members, please log in to download this worksheet.

Not a member? Please sign up to gain complete access.

www.mathworksheets4kids.com

9) The height of a triangle is $2\frac{4}{5}$ m. What is the area of the triangle, if the base is $\frac{10}{13}$ m?