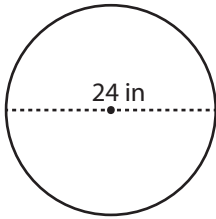


Name : \_\_\_\_\_

Diameter: MS1

## Circle - Circumference

Example :



**Circumference of a circle =  $2\pi r$  or  $\pi d$**

Diameter (d) = 24 in

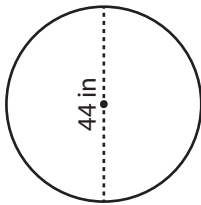
Circumference =  $\pi d$

=  $3.14 \times 24$

Circumference = **75.4 in**

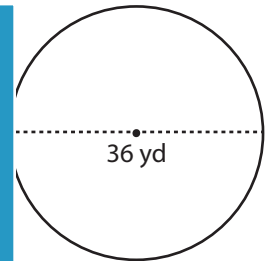
Find the circumference of each circle. Round your answer to the nearest tenth. (use  $\pi = 3.14$ )

1)



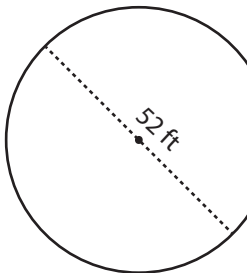
Circumference =

2)

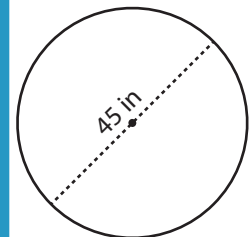


Circumference =

4)

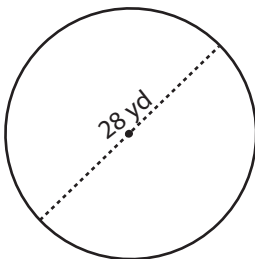


Circumference =



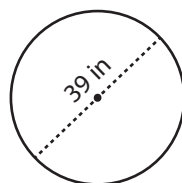
Circumference =

7)



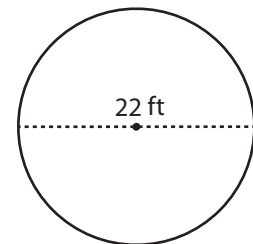
Circumference =

8)



Circumference =

9)



Circumference =

**PREVIEW**

Gain complete access to the largest collection of worksheets in all subjects!

Members, please log in to download this worksheet.

Not a member? Please sign up to gain complete access.

[www.mathworksheets4kids.com](http://www.mathworksheets4kids.com)