

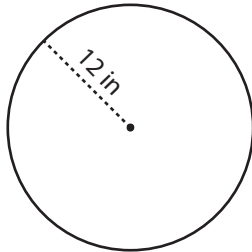
Name : \_\_\_\_\_

Radius/Diameter: ES2

## Circle - Circumference

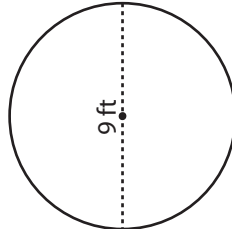
Find the circumference of each circle in terms of  $\pi$ .

1)



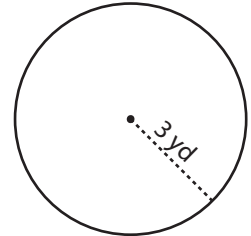
Circumference = \_\_\_\_\_

2)

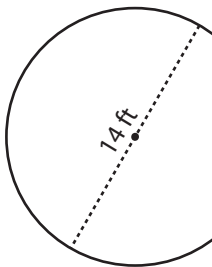


Circumference = \_\_\_\_\_

3)



4)



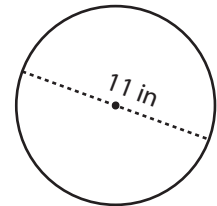
Circumference = \_\_\_\_\_

**PREVIEW**  
Gain complete access to the largest collection of worksheets in all subjects!

Members, please log in to download this worksheet.

Not a member? Please sign up to gain complete access.

[www.mathworksheets4kids.com](http://www.mathworksheets4kids.com)



Circumference = \_\_\_\_\_

7) Calculate the circumference of a circle with a radius of 10 in. Write your answer in terms of  $\pi$ .

Circumference = \_\_\_\_\_

Circumference = \_\_\_\_\_

8) What is the circumference of a circle with a radius of 17 in? Write your answer in terms of  $\pi$ .

Circumference = \_\_\_\_\_