

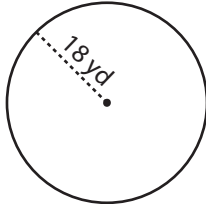
Name : _____

Circle - Circumference

Radius/Diameter: ES3

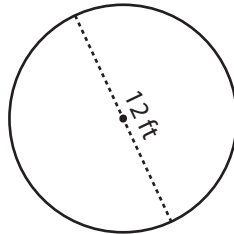
Find the circumference of each circle in terms of π .

1)



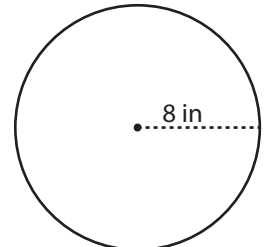
Circumference = _____

2)

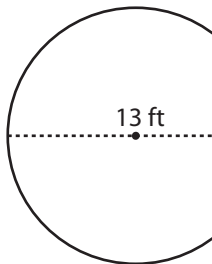


Circumference = _____

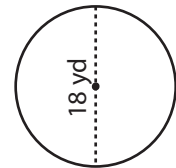
3)



4)



Circumference = _____



Circumference = _____

PREVIEW

Gain complete access to the largest collection of worksheets in all subjects!

Members, please log in to download this worksheet.

Not a member? Please sign up to gain complete access.

www.mathworksheets4kids.com

7) A circular clock face has a radius of 10 in. Find its circumference in terms of π .

Circumference = _____

Circumference = _____

8) Find the length of the plastic strip required to fix around the corner of a circular table with a radius of 10 in. Express your answer in terms of π .

Circumference = _____