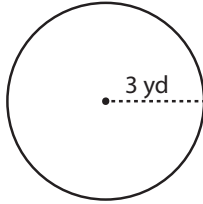


Name : _____

Radius: ES1

Circle - Circumference

Example :



Circumference of a circle = $2\pi r$

Radius (r) = 3yd

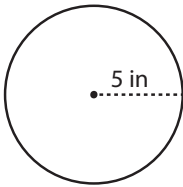
Circumference = $2\pi r$

= $2 \times \pi \times 3$

Circumference = **6π yd**

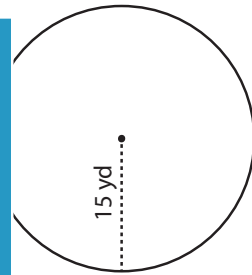
Find the circumference of each circle in terms of π .

1)



Circumference = _____

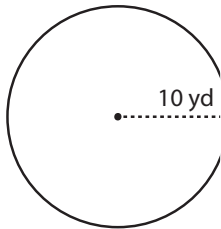
2)



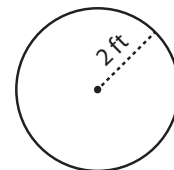
Circumference = _____

3)

4)

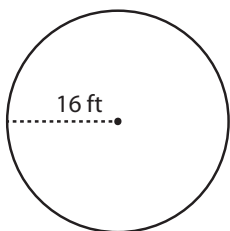


Circumference = _____



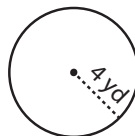
Circumference = _____

7)



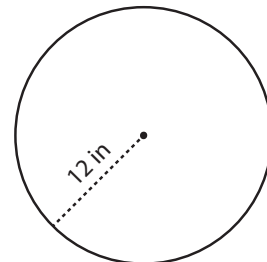
Circumference = _____

8)



Circumference = _____

9)



Circumference = _____

PREVIEW

Gain complete access to the largest collection of worksheets in all subjects!

Members, please log in to download this worksheet.

Not a member? Please sign up to gain complete access.

www.mathworksheets4kids.com