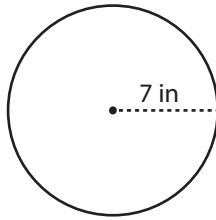


Name : _____

Circle - Circumference

Radius: ES2

Example :



Circumference of a circle = $2\pi r$

Radius (r) = 7 in

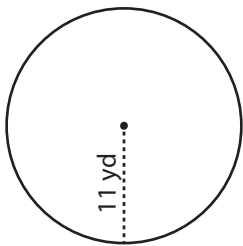
Circumference = $2\pi r$

= $2 \times \pi \times 7$

Circumference = **14π in**

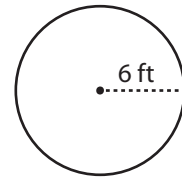
Find the circumference of each circle in terms of π .

1)



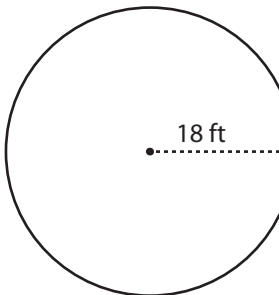
Circumference = _____

2)



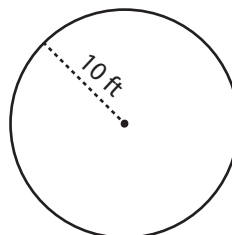
Circumference = _____

4)



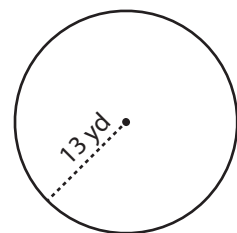
Circumference = _____

8)



Circumference = _____

9)



Circumference = _____

PREVIEW

Gain complete access to the largest collection of worksheets in all subjects!

Members, please log in to download this worksheet.

Not a member? Please sign up to gain complete access.

www.mathworksheets4kids.com