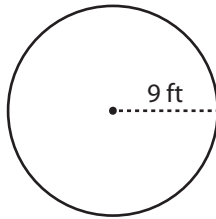


Name : _____

Circle - Circumference

Radius: ES3

Example :



Circumference of a circle = $2\pi r$

Radius (r) = 9 ft

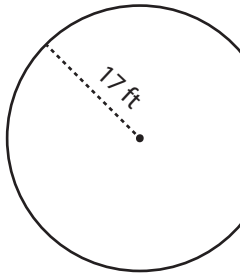
Circumference = $2\pi r$

= $2 \times \pi \times 9$

Circumference = **18π ft**

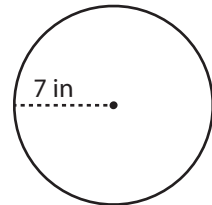
Find the circumference of each circle in terms of π .

1)



Circumference =

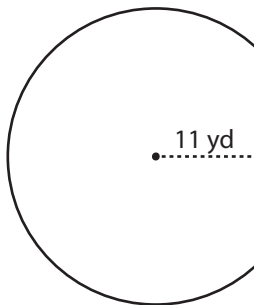
2)



Circumference =

3)

4)

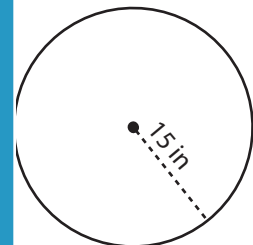


Circumference =

Members, please
log in to
download this
worksheet.

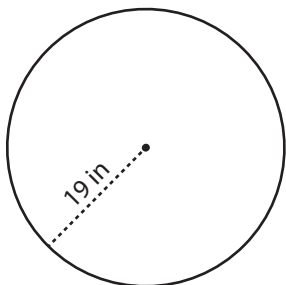
Not a member?
Please sign up to
gain complete
access.

www.mathworksheets4kids.com



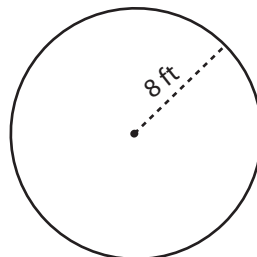
Circumference =

7)



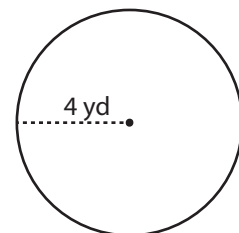
Circumference =

8)



Circumference =

9)



Circumference =