

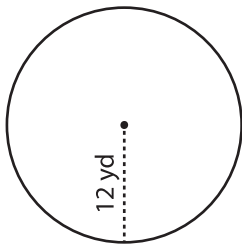
Name : \_\_\_\_\_

## Area & Circumference

ES5

Find the area and circumference of each circle in terms of  $\pi$ .

1)



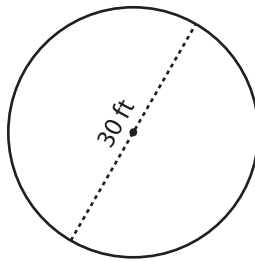
Radius = \_\_\_\_\_

Diameter = \_\_\_\_\_

Area = \_\_\_\_\_

Circumference = \_\_\_\_\_

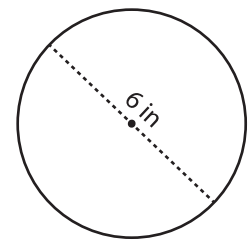
2)



Radius = \_\_\_\_\_

Diameter = \_\_\_\_\_

3)



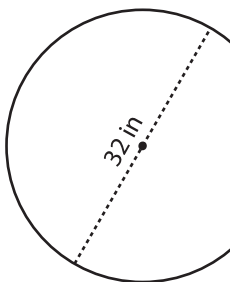
Radius = \_\_\_\_\_

Diameter = \_\_\_\_\_

Area = \_\_\_\_\_

Circumference = \_\_\_\_\_

4)

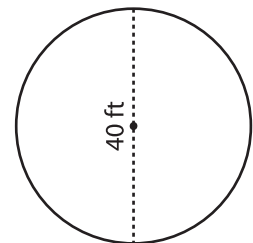


Radius = \_\_\_\_\_

Diameter = \_\_\_\_\_

Area = \_\_\_\_\_

Circumference = \_\_\_\_\_



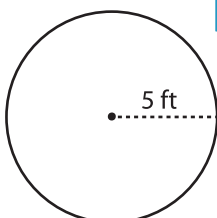
Radius = \_\_\_\_\_

Diameter = \_\_\_\_\_

Area = \_\_\_\_\_

Circumference = \_\_\_\_\_

7)

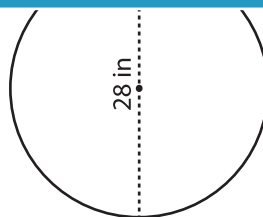


Radius = \_\_\_\_\_

Diameter = \_\_\_\_\_

Area = \_\_\_\_\_

Circumference = \_\_\_\_\_

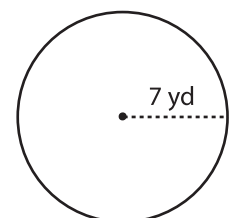


Radius = \_\_\_\_\_

Diameter = \_\_\_\_\_

Area = \_\_\_\_\_

Circumference = \_\_\_\_\_



Radius = \_\_\_\_\_

Diameter = \_\_\_\_\_

Area = \_\_\_\_\_

Circumference = \_\_\_\_\_

# PREVIEW

Gain complete access to the largest collection of worksheets in all subjects!

Members, please log in to download this worksheet.

Not a member? Please sign up to gain complete access.

[www.mathworksheets4kids.com](http://www.mathworksheets4kids.com)