

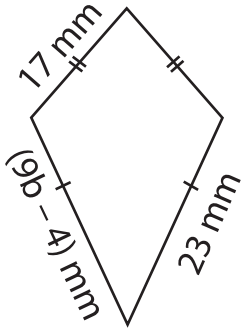
Name : \_\_\_\_\_

## Two-Step Equations: Shapes

Type 1: S3

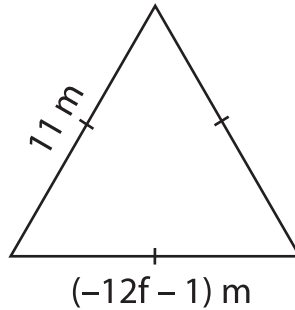
Find the unknown value given in each shape.

1)



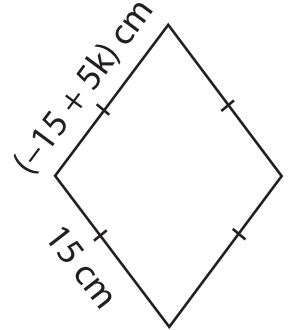
$b =$  \_\_\_\_\_

2)



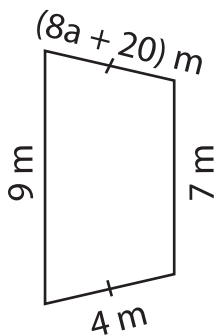
$r =$  \_\_\_\_\_

3)



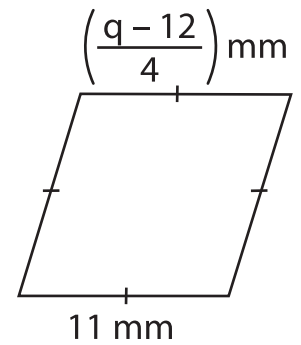
$k =$  \_\_\_\_\_

4)



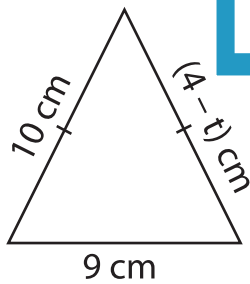
$a =$  \_\_\_\_\_

5)

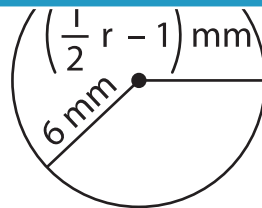


$q =$  \_\_\_\_\_

7)

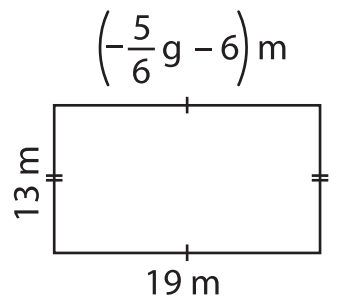


$t =$  \_\_\_\_\_



$r =$  \_\_\_\_\_

9)



$g =$  \_\_\_\_\_

# PREVIEW

Gain complete access to the largest collection of worksheets in all subjects!

Members, please log in to download this worksheet.

Not a member? Please sign up to gain complete access.

[www.mathworksheets4kids.com](http://www.mathworksheets4kids.com)