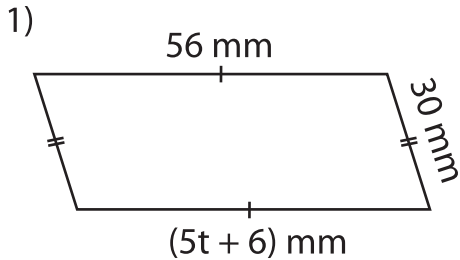


Name : \_\_\_\_\_

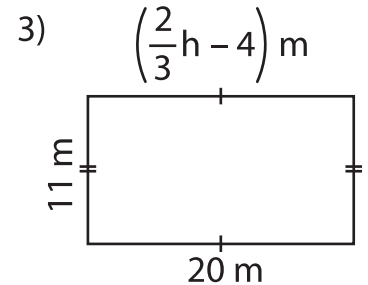
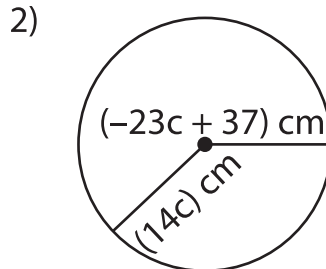
## Two-Step Equations: Shapes

Type 1: S4

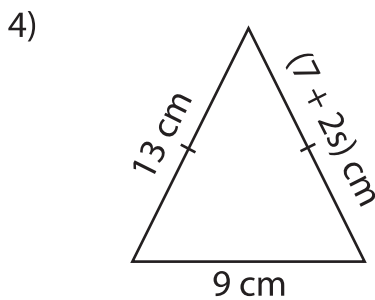
Find the unknown value given in each shape.



$t =$  \_\_\_\_\_



$h =$  \_\_\_\_\_



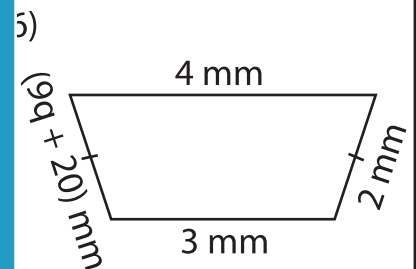
$s =$  \_\_\_\_\_

Gain complete access to the largest collection of worksheets in all subjects!

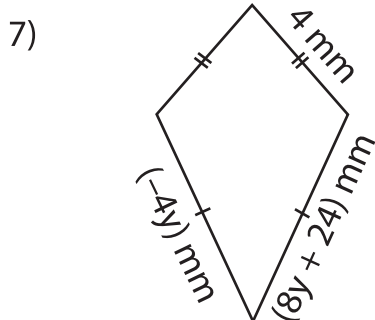
Members, please log in to download this worksheet.

Not a member? Please sign up to gain complete access.

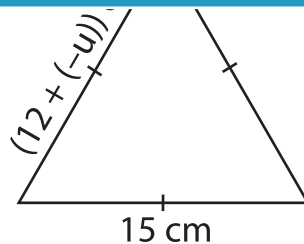
[www.mathworksheets4kids.com](http://www.mathworksheets4kids.com)



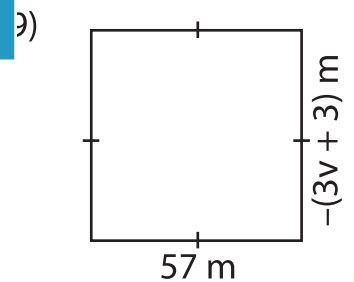
$q =$  \_\_\_\_\_



$y =$  \_\_\_\_\_



$u =$  \_\_\_\_\_



$v =$  \_\_\_\_\_