

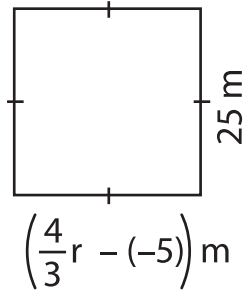
Name : _____

Two-Step Equations: Shapes

Type 1: S5

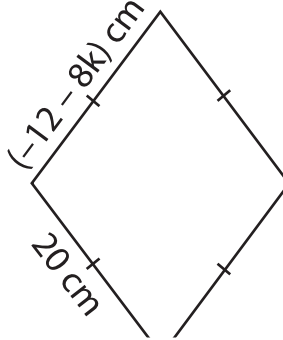
Find the unknown value given in each shape.

1)

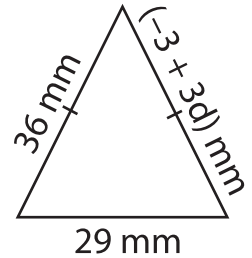


$r =$ _____

2)

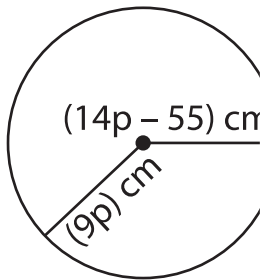


3)



$d =$ _____

4)



$p =$ _____

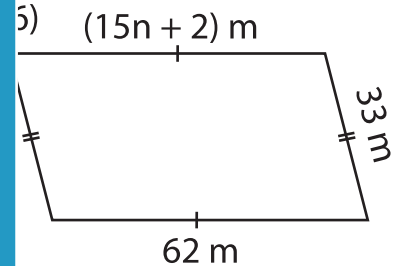
Gain complete access to the largest collection of worksheets in all subjects!

Members, please log in to download this worksheet.

Not a member? Please sign up to gain complete access.

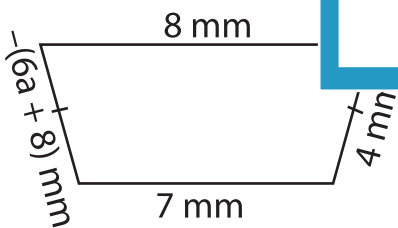
www.mathworksheets4kids.com

5)

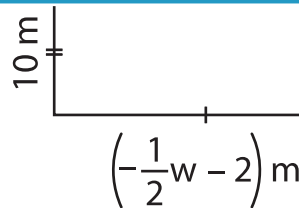


$n =$ _____

7)

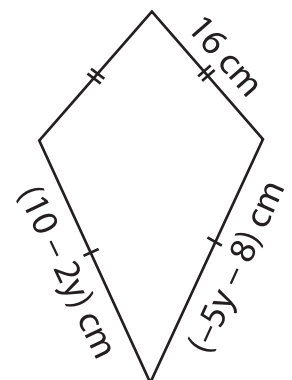


$a =$ _____



$w =$ _____

9)



$y =$ _____