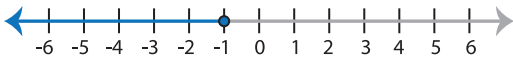
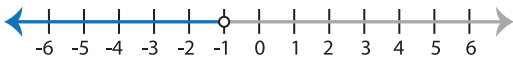
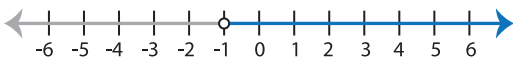
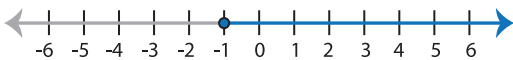


Identifying Graphs



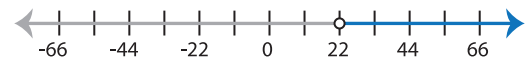
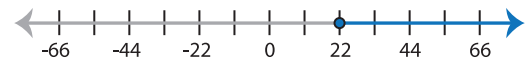
ES1

Choose the correct graph that best describes the solution for each inequality.

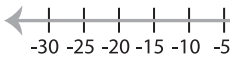
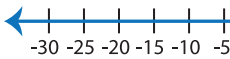
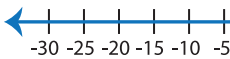
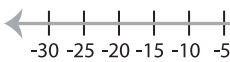
1) $10 + 8x > 2$

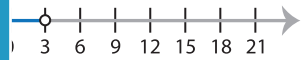
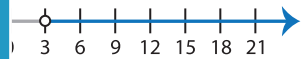
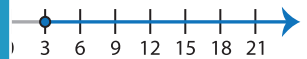

- a) 
- b) 
- c) 
- d) 

2) $\frac{x-4}{3} \leq 6$

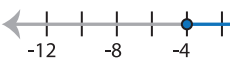
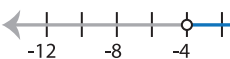


- a) 
- b) 
- c) 
- d) 

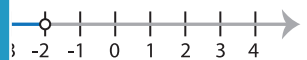
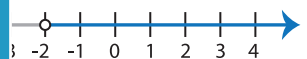
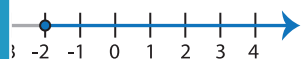
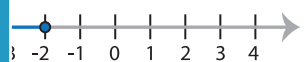
3) $\frac{x}{5} + 3 \geq 6$

- a) 
- b) 
- c) 
- d) 

- a) 
- b) 
- c) 
- d) 

5) $\frac{x+12}{8} > 1$

- a) 
- b) 
- c) 
- d) 

- a) 
- b) 
- c) 
- d) 

PREVIEW




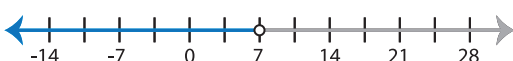
Gain complete access to the largest collection of worksheets in all subjects!

Members, please log in to download this worksheet.

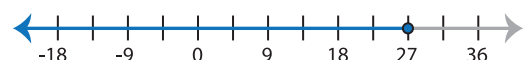
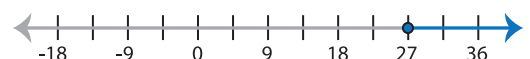
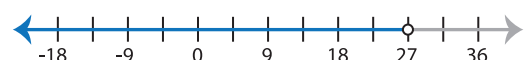
Not a member? Please sign up to gain complete access.

www.mathworksheets4kids.com

7) $6x - 28 \geq 14$

- a) 
- b) 
- c) 
- d) 

8) $\frac{x}{9} + 2 < 5$

- a) 
- b) 
- c) 
- d) 