

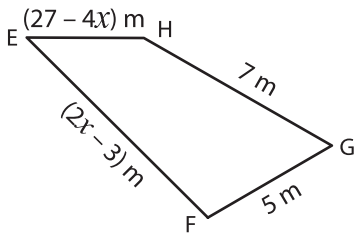
Name : _____

L1S2

Sides of a Quadrilateral

Solve for x and find the indicated side lengths.

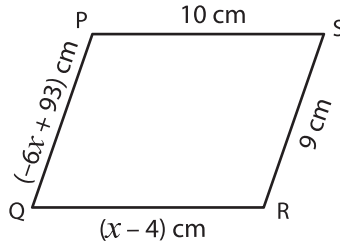
1)



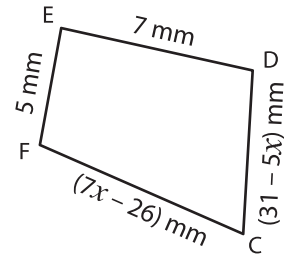
Perimeter = 24 m ; $x =$ _____

EF = _____ ; EH = _____

2)



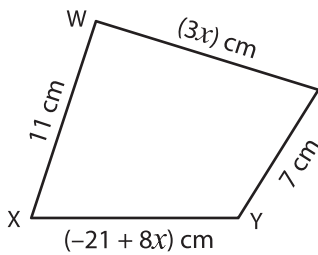
3)



Perimeter = 27 mm ; $x =$ _____

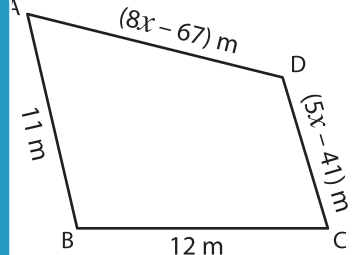
EF = _____ ; CD = _____

4)



Perimeter = 41 cm ; $x =$ _____

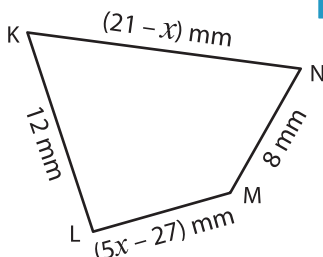
XY = _____ ; WZ = _____



Perimeter = 45 m ; $x =$ _____

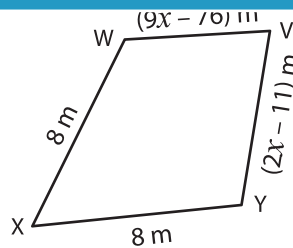
AD = _____ ; AD = _____

7)



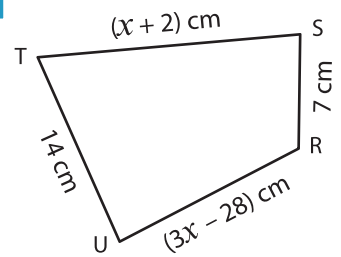
Perimeter = 42 mm ; $x =$ _____

LM = _____ ; KN = _____



Perimeter = 28 m ; $x =$ _____

VY = _____ ; VW = _____



Perimeter = 51 cm ; $x =$ _____

RU = _____ ; TS = _____

PREVIEW

Gain complete access to the largest collection of worksheets in all subjects!

Members, please log in to download this worksheet.

Not a member? Please sign up to gain complete access.

www.mathworksheets4kids.com