

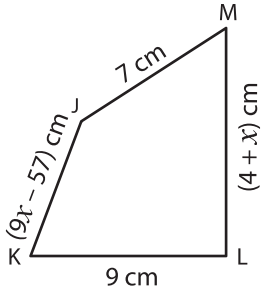
Name: _____

L1S3

Sides of a Quadrilateral

Solve for x and find the indicated side lengths.

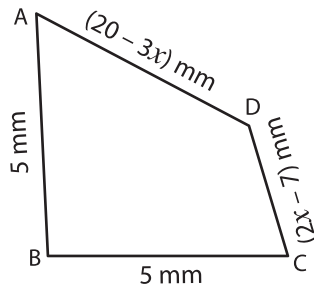
1)



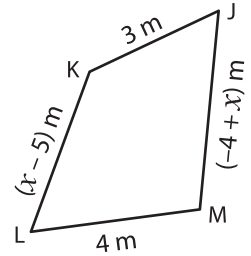
Perimeter = 33 cm ; $x =$ _____

JK = _____ ; LM = _____

2)



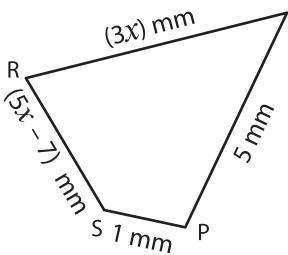
3)



Perimeter = 16 m ; $x =$ _____

L = _____ ; MJ = _____

4)



Perimeter = 15 mm ; $x =$ _____

QR = _____ ; SR = _____

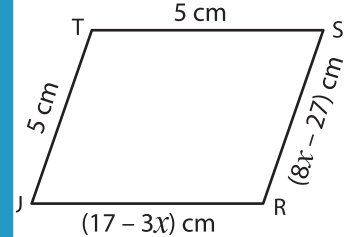
PREVIEW

Gain complete access to the largest collection of worksheets in all subjects!

Members, please log in to download this worksheet.

Not a member? Please sign up to gain complete access.

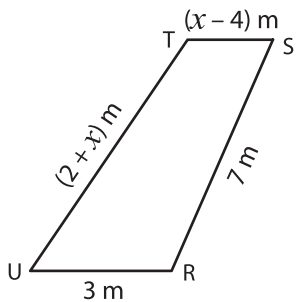
www.mathworksheets4kids.com



Perimeter = 20 cm ; $x =$ _____

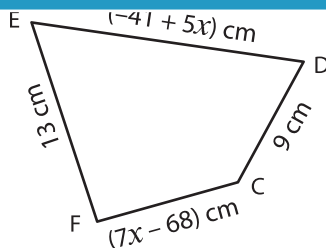
R = _____ ; RS = _____

7)



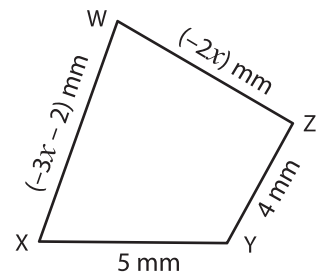
Perimeter = 20 m ; $x =$ _____

TU = _____ ; ST = _____



Perimeter = 45 cm ; $x =$ _____

CF = _____ ; DE = _____



Perimeter = 22 mm ; $x =$ _____

WX = _____ ; WZ = _____