

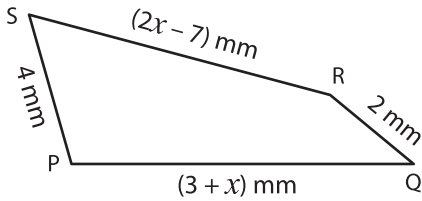
Name: _____

L1S4

Sides of a Quadrilateral

Solve for x and find the indicated side lengths.

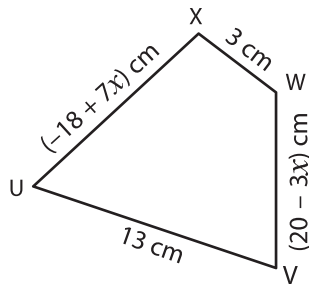
1)



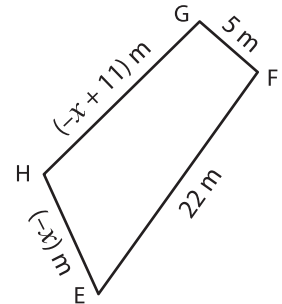
Perimeter = 29 mm ; $x =$ _____

PQ = _____ ; SR = _____

2)



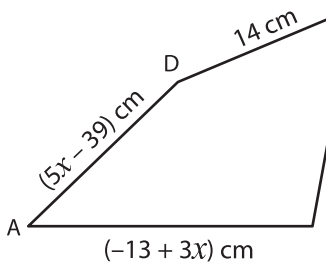
3)



Perimeter = 58 m ; $x =$ _____

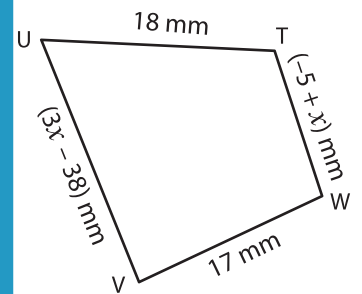
H = _____ ; EH = _____

4)



Perimeter = 68 cm ; $x =$ _____

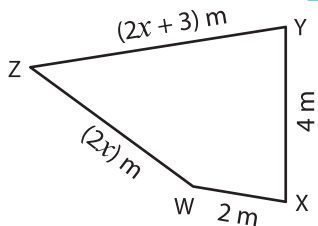
AB = _____ ; AD = _____



Perimeter = 68 mm ; $x =$ _____

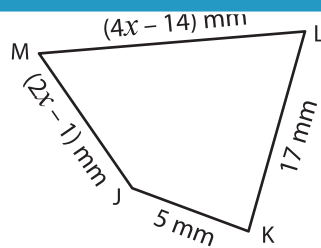
V = _____ ; WT = _____

7)



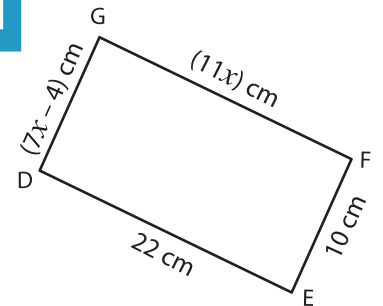
Perimeter = 21 m ; $x =$ _____

WZ = _____ ; YZ = _____



Perimeter = 55 mm ; $x =$ _____

JM = _____ ; ML = _____



Perimeter = 64 cm ; $x =$ _____

DG = _____ ; FG = _____

PREVIEW

Gain complete access to the largest collection of worksheets in all subjects!

Members, please log in to download this worksheet.

Not a member? Please sign up to gain complete access.

www.mathworksheets4kids.com