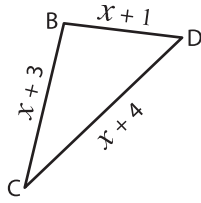


Missing Sides

Find the value of x and compute the length of the sides for each triangle.

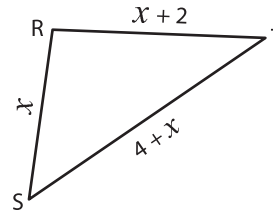
1)



Perimeter = 17 in ; $x =$ _____ ;

BC = _____ ; CD = _____ ; BD = _____

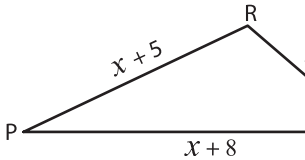
2)



Perimeter = 21 ft ; $x =$ _____ ;

RS = _____ ; ST = _____ ; RT = _____

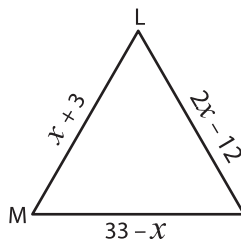
3)



Perimeter = 36 yd ; $x =$ _____ ;

PQ = _____ ; QR = _____

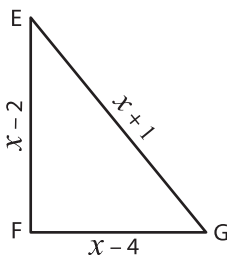
5)



Perimeter = 54 ft ; $x =$ _____ ;

LM = _____ ; MN = _____

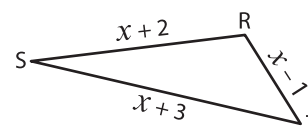
7)



Perimeter = 31 in ; $x =$ _____ ;

EF = _____ ; FG = _____ ; EG = _____

8)



Perimeter = 16 ft ; $x =$ _____ ;

RS = _____ ; ST = _____ ; RT = _____

PREVIEW

Gain complete access to the largest collection of worksheets in all subjects!

Members, please log in to download this worksheet.

Not a member? Please sign up to gain complete access.

www.mathworksheets4kids.com



= _____ ;

_____ ; TV = _____



= _____ ;

_____ ; XZ = _____