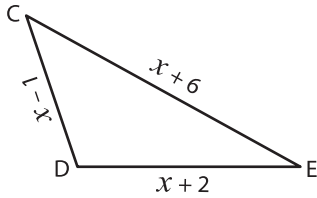


# Missing Sides

Find the value of  $x$  and compute the length of the sides for each triangle.

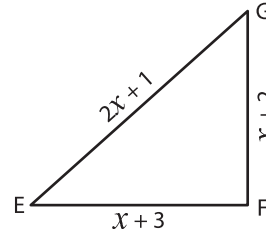
1)



Perimeter = 25 ft;  $x =$  \_\_\_\_\_ ;

CD = \_\_\_\_\_ ; DE = \_\_\_\_\_ ; CE = \_\_\_\_\_

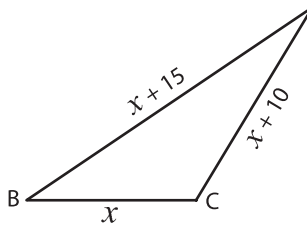
2)



Perimeter = 34 yd;  $x =$  \_\_\_\_\_ ;

EG = \_\_\_\_\_ ; EF = \_\_\_\_\_ ; FG = \_\_\_\_\_

3)



Perimeter = 85 in;  $x =$  \_\_\_\_\_

BD = \_\_\_\_\_ ; BC = \_\_\_\_\_

# PREVIEW

Gain complete access to the largest  
collection of worksheets in all subjects!

Members, please  
log in to  
download this  
worksheet.

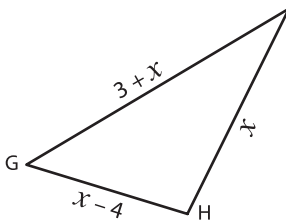
Not a member?  
Please sign up to  
gain complete  
access.

[www.mathworksheets4kids.com](http://www.mathworksheets4kids.com)



\_\_\_\_\_ ;  
\_\_\_\_\_ ; AC = \_\_\_\_\_

5)



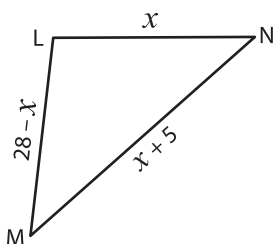
Perimeter = 32 yd;  $x =$  \_\_\_\_\_

FG = \_\_\_\_\_ ; GH = \_\_\_\_\_



\_\_\_\_\_ ;  
\_\_\_\_\_ ; PR = \_\_\_\_\_

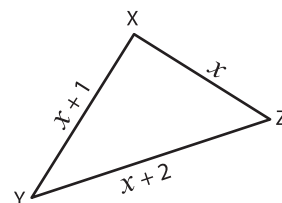
7)



Perimeter = 47 ft;  $x =$  \_\_\_\_\_ ;

LM = \_\_\_\_\_ ; MN = \_\_\_\_\_ ; LN = \_\_\_\_\_

8)



Perimeter = 12 yd;  $x =$  \_\_\_\_\_ ;

XY = \_\_\_\_\_ ; YZ = \_\_\_\_\_ ; XZ = \_\_\_\_\_