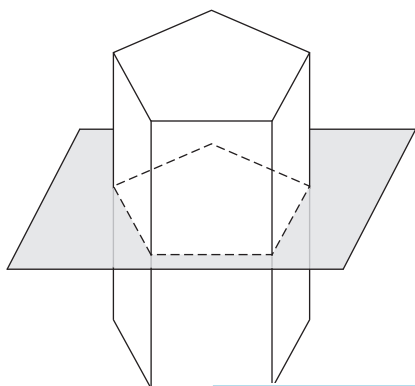


Name : _____

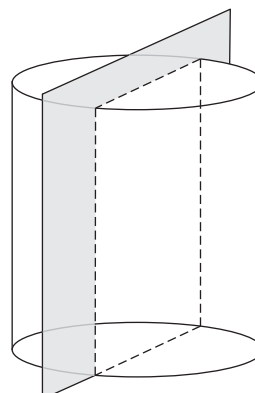
Cross Section of 3D Shapes

Identify and name the 2D shape that is formed on slicing the following 3D figures.

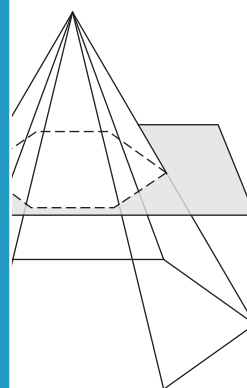
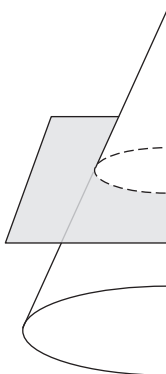
1)



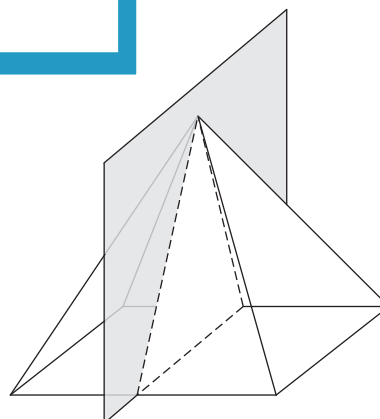
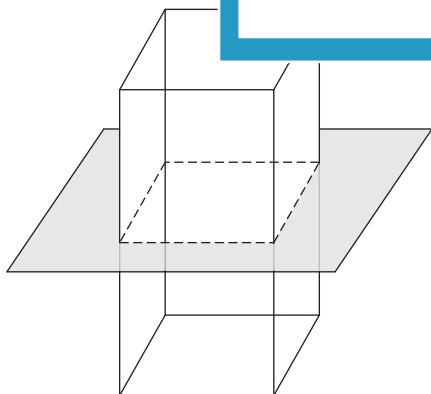
2)



3)



5)



PREVIEW

Gain complete access to the largest collection of worksheets in all subjects!

Members, please log in to download this worksheet.

Not a member? Please sign up to gain complete access.

www.mathworksheets4kids.com