

Name : _____

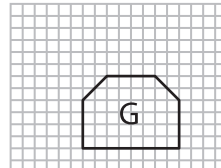
Scale Factors - MCQ

Sheet 1

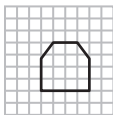
- 1) What would be the actual length, if the length of the model is 25 ft and the scale factor is lesser than one?

a) 20 ft b) 25 ft c) 30 ft

- 2) Which figure is the scaled copy of figure G?



a)



- 3) Which of the follow

Gain complete access to the largest collection of worksheets in all subjects!

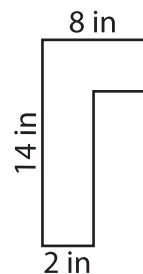
Members, please log in to download this worksheet.

Not a member? Please sign up to gain complete access.

www.mathworksheets4kids.com



a)

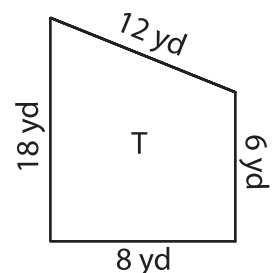
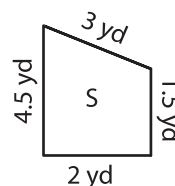


- 4) What happens to t

e to new image is 1 : 3?

a) Enlargement b) Reduction c) Remains same

- 5) Identify the scale factor of figure S to T.



a) 4 : 1 b) 1 : 4 c) 1 : 4.5