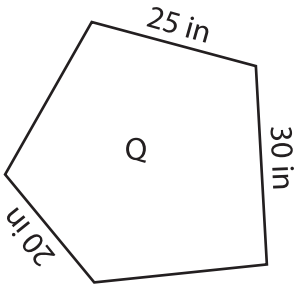
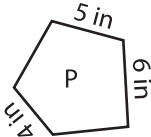


Scale Factors - MCQ

1) Which of the following is the scale factor of figure P to Q?

- a) 5 : 1 b) 1 : 10 c) 1 : 5

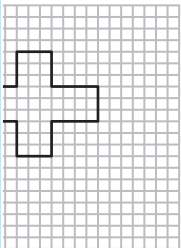
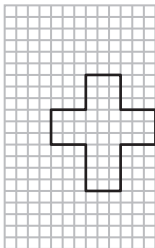


2) What happens to the new image if the scale factor of the original image to new image is 1 : 1?

- a) Remains same enlargement

3) Identify the scaled

a)



4) What would be the
than one?

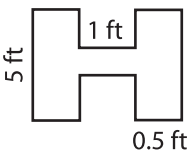
- a) 10 ft

the scale factor is greater

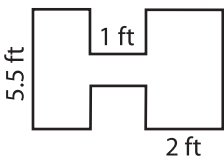
yd

5) Which of the following figures is the scaled copy of the figure B?

a)



b)



c)

