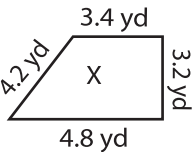


Scale Factors - MCQ

1) Which of the following figures is the scaled copy of the figure X?



- a)
- b)
- c)

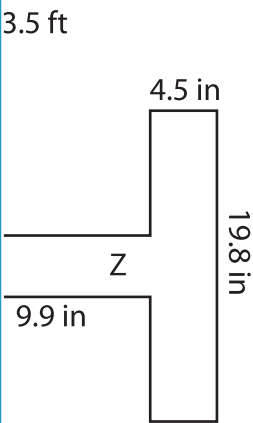
2) Which would be the scale factor greater than one? _____ and the scale factor is

- a) 4.8 yd

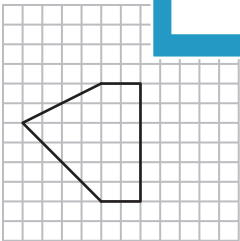
3) Identify the scale factor

- a) 1 : 2.8

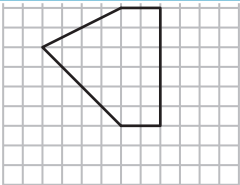
4) Identify the scaled



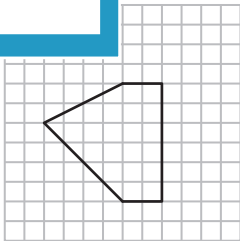
a)



b)



c)



5) What happens to the new image if the scale factor of the original image to new image is 1 : 5.4?

- a) Enlargement
- b) Reduction
- c) Remains same