

Name : \_\_\_\_\_

## Matching 3D Shapes & Views

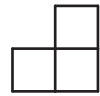
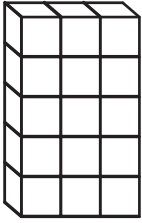
Match each 3D shape to its corresponding view.

1)



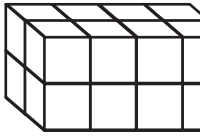
Front View

2)



Right Side View

3)

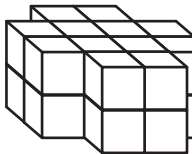


**PREVIEW**  
Gain complete access to the largest collection of worksheets in all subjects!



Front View

4)



Members, please log in to download this worksheet.

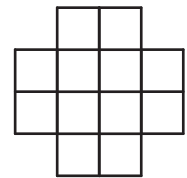
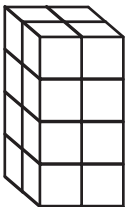
Not a member? Please sign up to gain complete access.

[www.mathworksheets4kids.com](http://www.mathworksheets4kids.com)



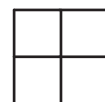
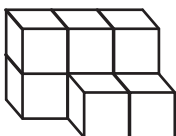
Left Side View

5)



Top View

6)



Left Side View