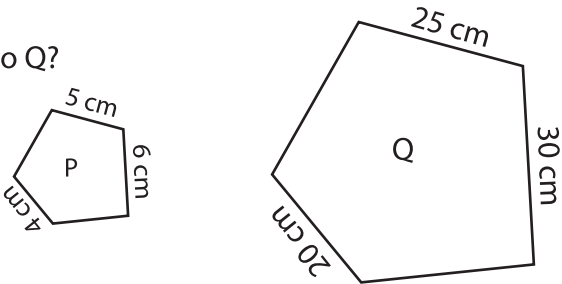


Scale Factors - MCQ

1) Which of the following is the scale factor of figure P to Q?

- a) 5 : 1                      b) 1 : 10                      c) 1 : 5

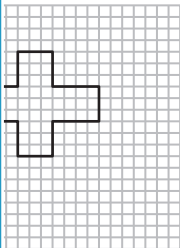
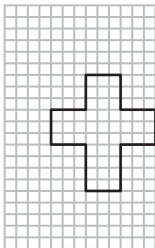


2) What happens to the new image if the scale factor of the original image to new image is 1 : 1?

- a) Remains same                      enlargement

3) Identify the scaled

- a)

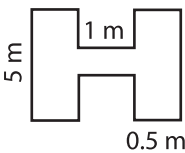


4) What would be the greater than one?                      and the scale factor is

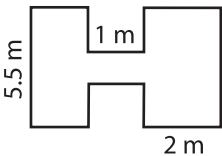
- a) 10 mm                      cm

5) Which of the following figures is the scaled copy of the figure B?

- a)



- b)



- c)

