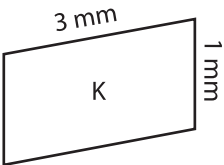
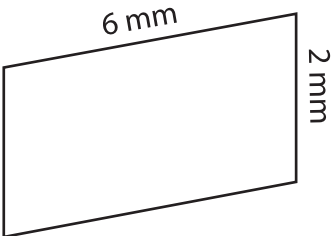
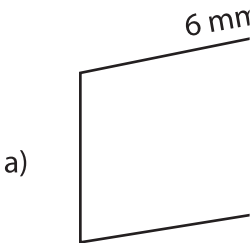


Scale Factors - MCQ

- 1) What happens to the new image if the scale factor of the original image to new image is 2.5 : 1?
- a) Enlargement                      b) Reduction                      c) Remains same

- 2) Identify the scaled copy of the figure K.
- 



- 3) What would be the scale factor if the new image is 20 cm and the scale factor is equal to one?
- a) 20 cm

- 4) Identify the scale factor for the new image.

- a) 1 : 1.6

- 5) Which of the following figures is the scaled copy of figure B?

