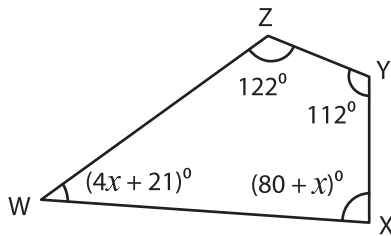


Name : _____

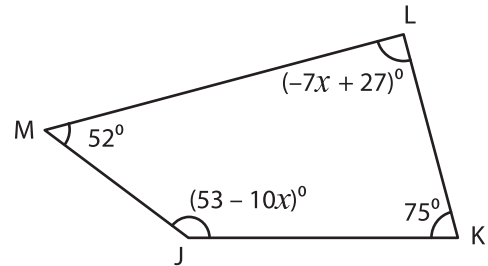
Quadrilateral - Angles

A) Solve for x in each quadrilateral and find the measure of the indicated angle.

1)



2)

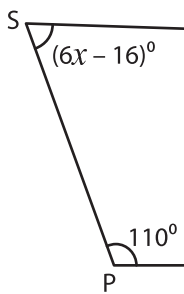


$x =$ _____

$x =$ _____

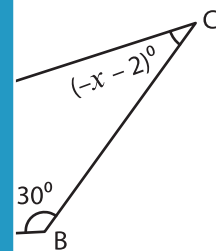
$m\angle X =$ _____

3)



$x =$ _____

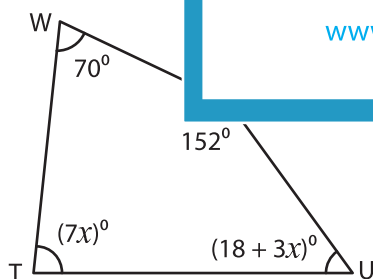
$m\angle Q =$ _____



B) Solve for x in e

indicated angles.

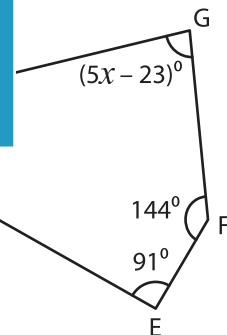
5)



$x =$ _____

$m\angle T =$ _____

$m\angle U =$ _____



$x =$ _____

$m\angle H =$ _____

$m\angle G =$ _____

PREVIEW

Gain complete access to the largest collection of worksheets in all subjects!

Members, please log in to download this worksheet.

Not a member? Please sign up to gain complete access.

www.mathworksheets4kids.com