

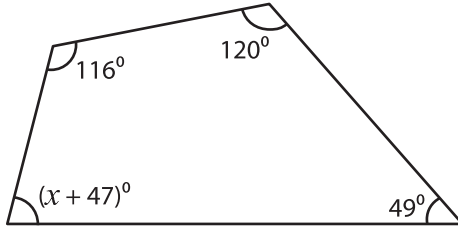
Name : _____

Quadrilateral - Angles

Sheet 3

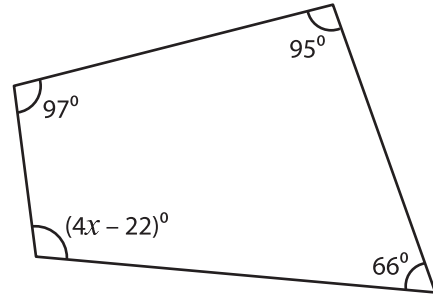
Find the value of x in each quadrilateral.

1)



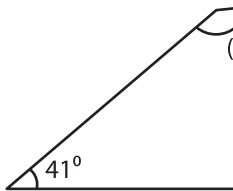
$x =$ _____

2)



$x =$ _____

3)



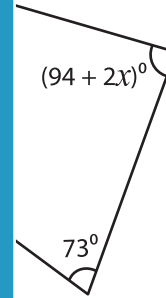
$x =$ _____

PREVIEW
Gain complete access to the largest collection of worksheets in all subjects!

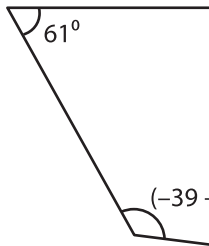
Members, please log in to download this worksheet.

Not a member? Please sign up to gain complete access.

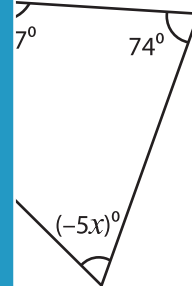
www.mathworksheets4kids.com



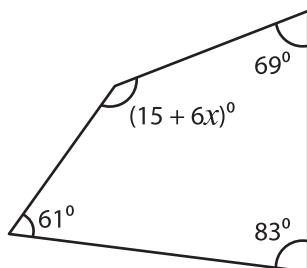
5)



$x =$ _____

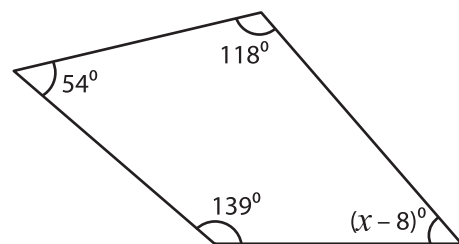


7)



$x =$ _____

8)



$x =$ _____