

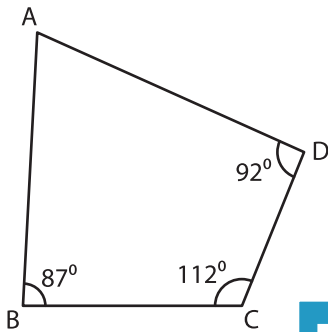
Name : \_\_\_\_\_

## Quadrilateral - Angles

Sheet 1

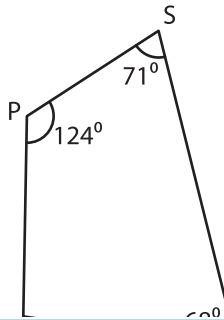
Find the measure of the indicated angle in each quadrilateral.

1)

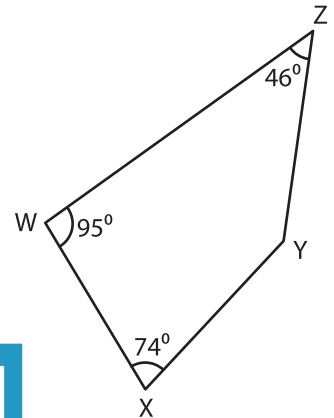


$m\angle A =$  \_\_\_\_\_

2)

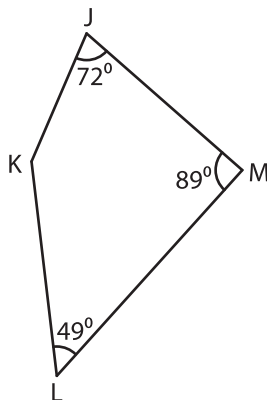


3)



$m\angle Y =$  \_\_\_\_\_

4)



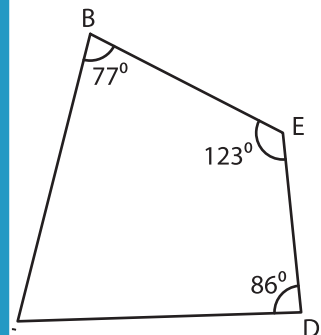
$m\angle K =$  \_\_\_\_\_

Gain complete access to the largest collection of worksheets in all subjects!

Members, please log in to download this worksheet.

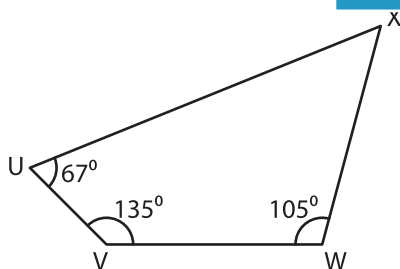
Not a member? Please sign up to gain complete access.

[www.mathworksheets4kids.com](http://www.mathworksheets4kids.com)

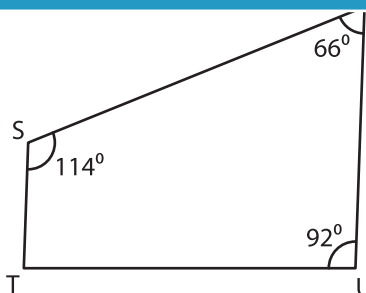


$m\angle C =$  \_\_\_\_\_

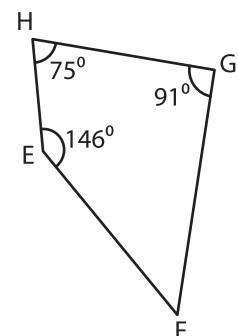
7)



$m\angle X =$  \_\_\_\_\_



$m\angle T =$  \_\_\_\_\_



$m\angle F =$  \_\_\_\_\_