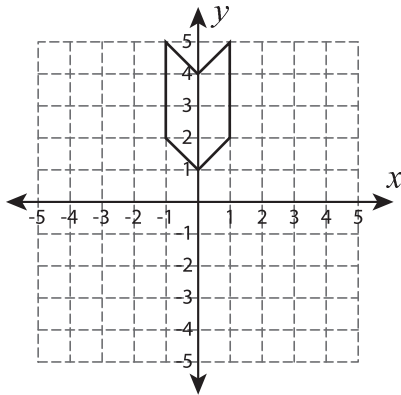


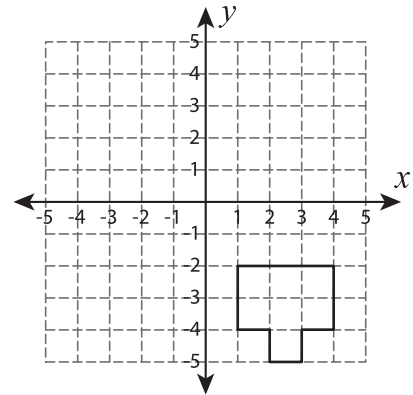
Rotate the Shapes

Graph the image of each shape after rotating it about the origin.

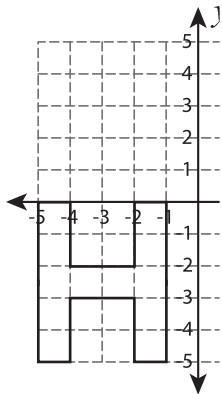
1) 180° rotation



2) 90° clockwise rotation



3) 90° counterclockwise rotation



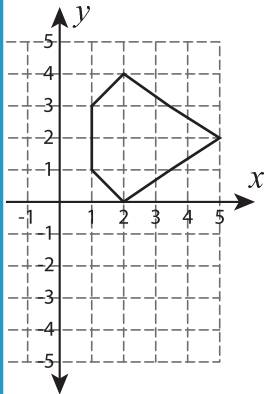
PREVIEW

Gain complete access to the largest collection of worksheets in all subjects!

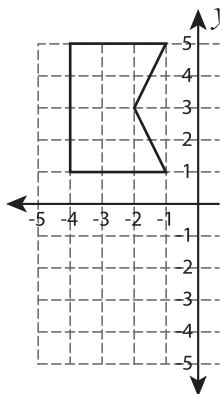
Members, please log in to download this worksheet.

Not a member? Please sign up to gain complete access.

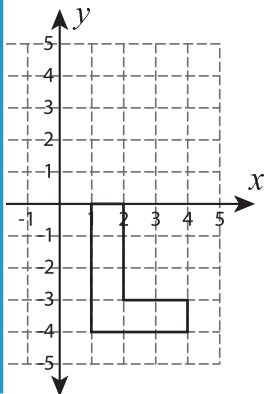
www.mathworksheets4kids.com



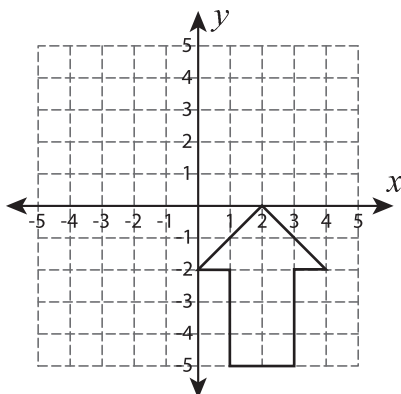
5) 90° clockwise rotation



6) 90° counterclockwise rotation



7) 180° rotation



8) 90° clockwise rotation

