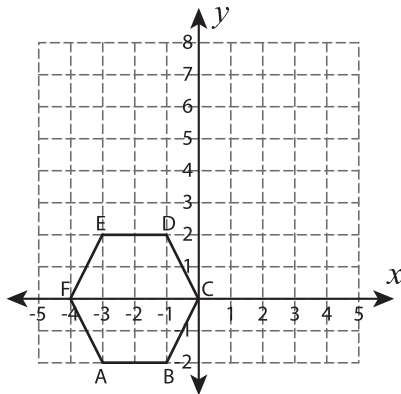


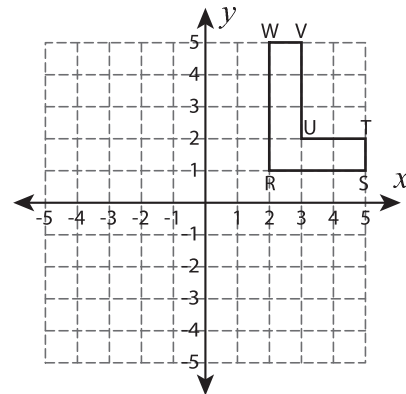
Transform the Shapes

Graph the image of each shape after the given transformation.

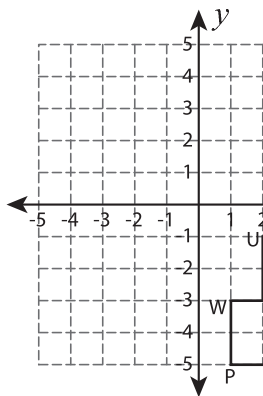
1) Reflection across the line $y = 3$



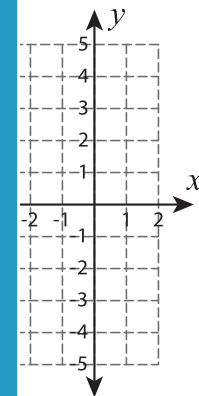
2) 90° counterclockwise rotation about the origin



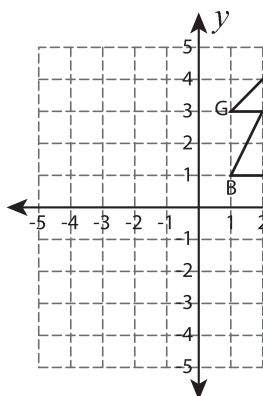
3) Translate 6 units up and



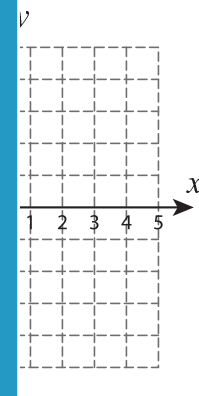
the line $x = -4$



5) 180° rotation about the



point and 3 units down



PREVIEW

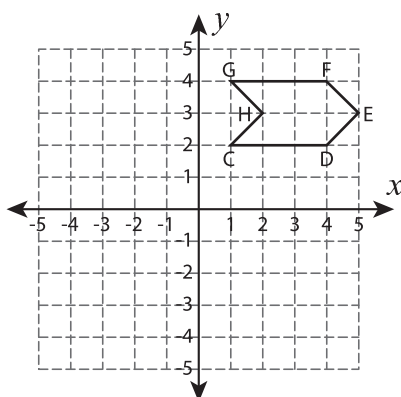
Gain complete access to the largest collection of worksheets in all subjects!

Members, please log in to download this worksheet.

Not a member? Please sign up to gain complete access.

www.mathworksheets4kids.com

7) Reflection across the x-axis



8) 90° clockwise rotation about the origin

