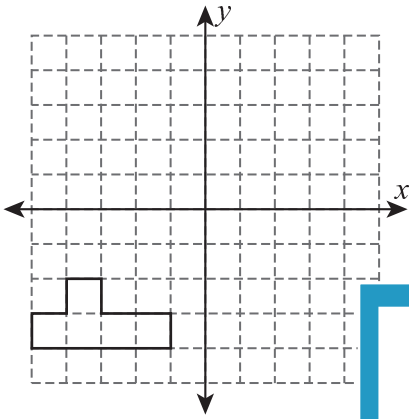


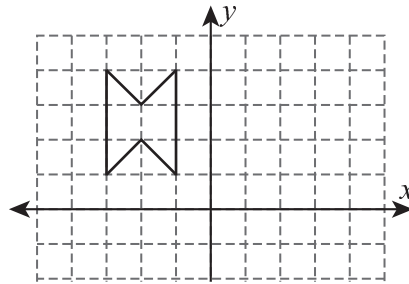
Translation of Shapes

Graph the image of each shape using the translation given.

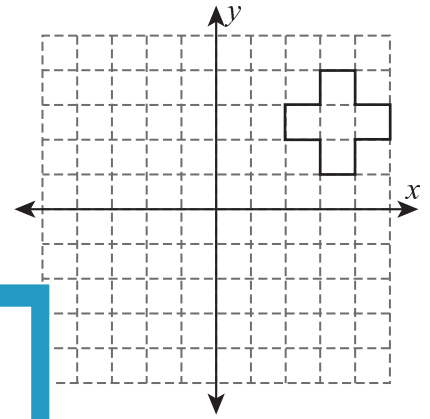
1) 3 units right and 2 units up



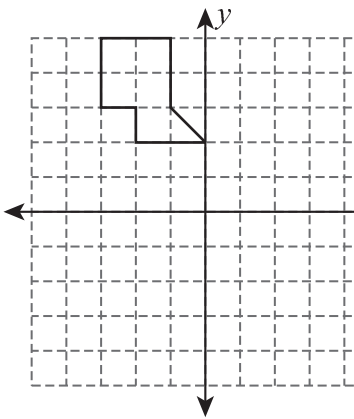
2) 5 units down and 4 units right



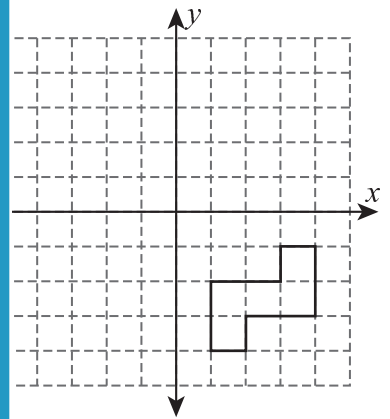
3) 1 unit left and 6 units down



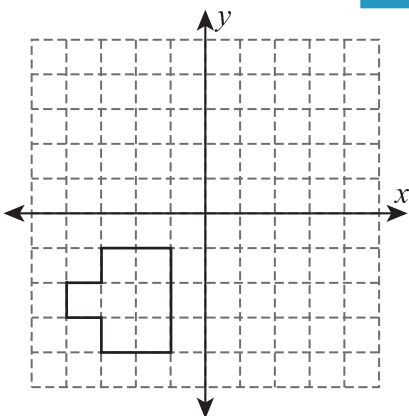
4) 7 units down and 1 unit left



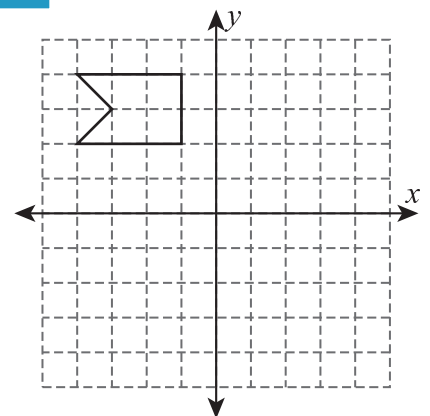
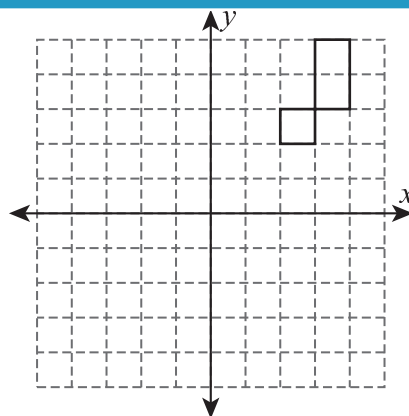
5) 2 units up and 4 units left



6) 4 units up and 5 units right



7) 3 units right and 3 units down



PREVIEW

Gain complete access to the largest collection of worksheets in all subjects!

Members, please log in to download this worksheet.

Not a member? Please sign up to gain complete access.

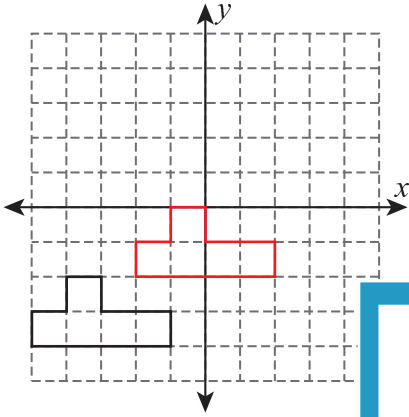
www.mathworksheets4kids.com

Answer key

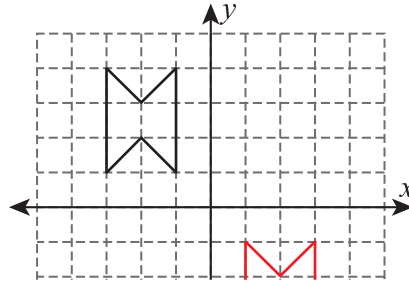
Translation of Shapes

Graph the image of each shape using the translation given.

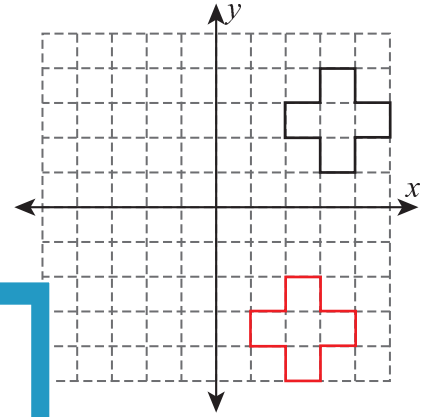
1) 3 units right and 2 units up



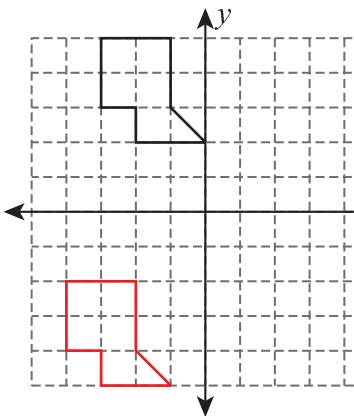
2) 5 units down and 4 units right



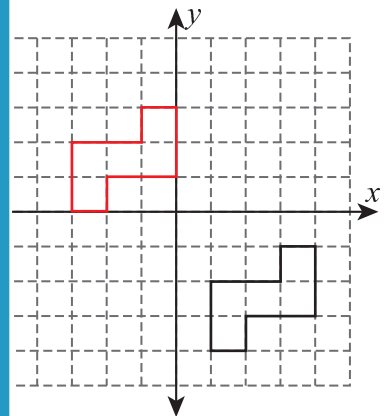
3) 1 unit left and 6 units down



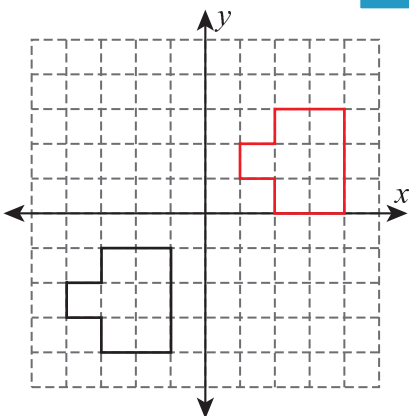
4) 7 units down and 1 unit left



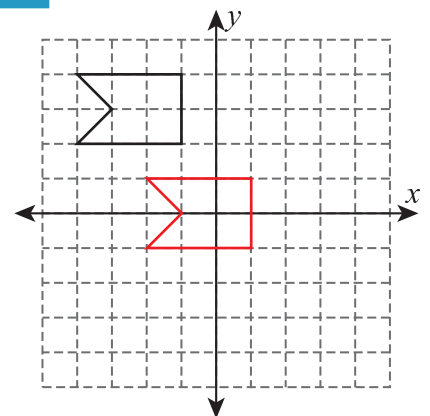
units up and 4 units left



7) 4 units up and 5 units right



units right and 3 units down



PREVIEW

Gain complete access to the largest collection of worksheets in all subjects!

Members, please log in to download this worksheet.

Not a member? Please sign up to gain complete access.

www.mathworksheets4kids.com