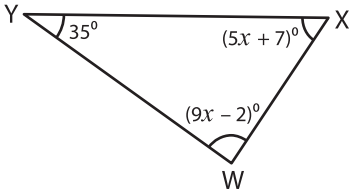


Triangle - Interior Angles

A) Solve for x in each triangle and find the measure of the indicated interior angle.

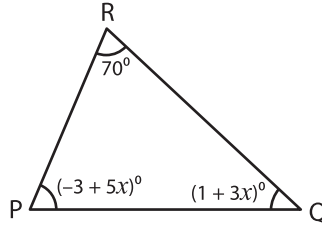
1)



$x =$ _____

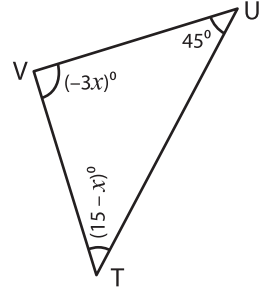
$m\angle X =$ _____

2)



$x =$ _____

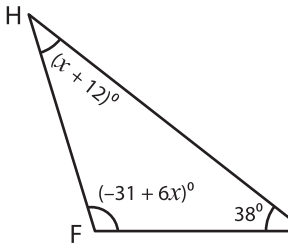
3)



$x =$ _____

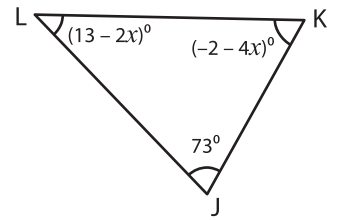
$m\angle T =$ _____

4)



$x =$ _____

$m\angle H =$ _____

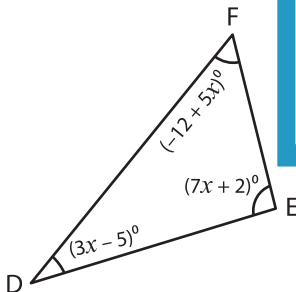


$x =$ _____

$m\angle K =$ _____

B) Solve for x in each triangle and find the measure of the indicated interior angle.

7)

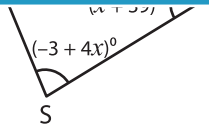


$x =$ _____

$m\angle D =$ _____

$m\angle E =$ _____

$m\angle F =$ _____

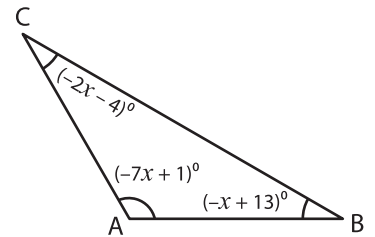


$x =$ _____

$m\angle S =$ _____

$m\angle T =$ _____

$m\angle U =$ _____



$x =$ _____

$m\angle A =$ _____

$m\angle B =$ _____

$m\angle C =$ _____

PREVIEW

Gain complete access to the largest collection of worksheets in all subjects!

Members, please log in to download this worksheet.

Not a member? Please sign up to gain complete access.

www.mathworksheets4kids.com