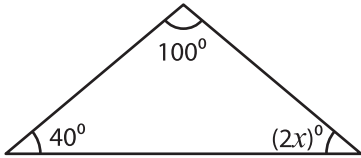


Triangle - Interior Angles

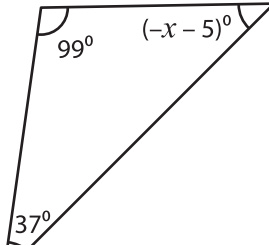
Find the value of x in each triangle.

1)



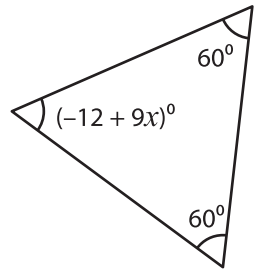
$x =$ _____

2)

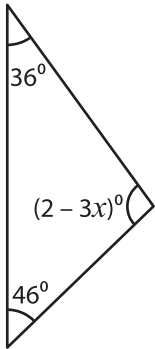


$x =$ _____

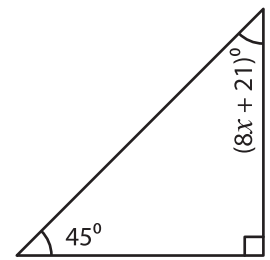
3)



4)

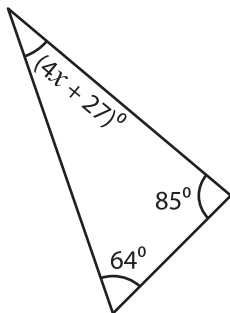


$x =$ _____

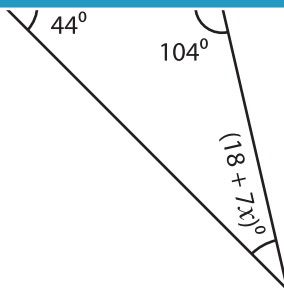


$x =$ _____

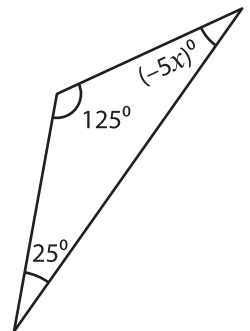
7)



$x =$ _____



$x =$ _____



$x =$ _____

PREVIEW

Gain complete access to the largest collection of worksheets in all subjects!

Members, please log in to download this worksheet.

Not a member? Please sign up to gain complete access.

www.mathworksheets4kids.com