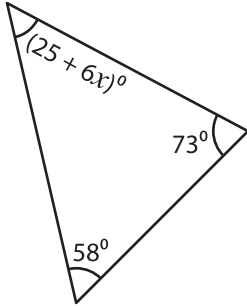


# Triangle - Interior Angles

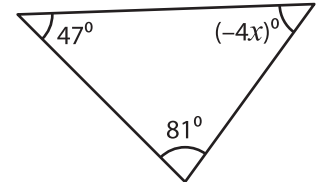
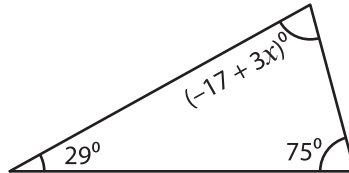
Find the value of  $x$  in each triangle.

1)



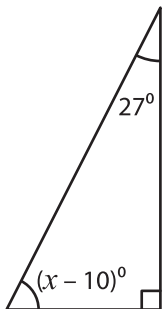
$x =$  \_\_\_\_\_

2)

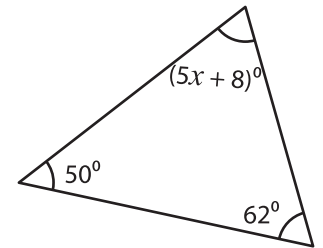


$x =$  \_\_\_\_\_

4)

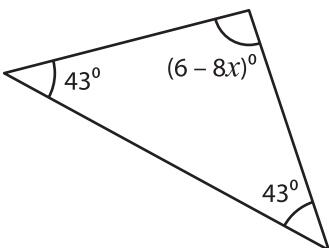


$x =$  \_\_\_\_\_

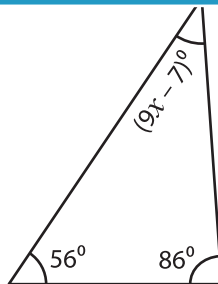


$x =$  \_\_\_\_\_

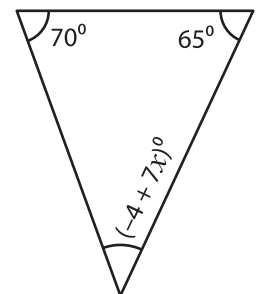
7)



$x =$  \_\_\_\_\_



$x =$  \_\_\_\_\_



$x =$  \_\_\_\_\_

## PREVIEW

Gain complete access to the largest collection of worksheets in all subjects!

Members, please log in to download this worksheet.

Not a member? Please sign up to gain complete access.

www.mathworksheets4kids.com