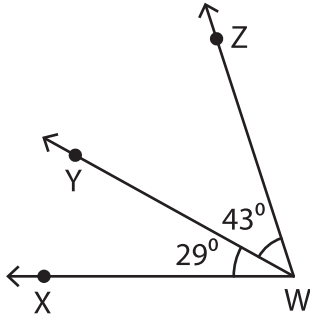


# Adjacent Angles

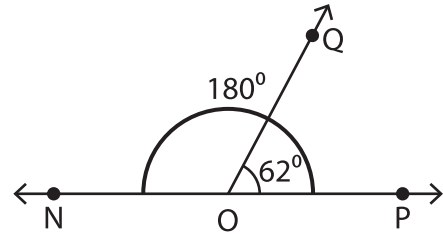
Find the measure of each indicated angle.

1)



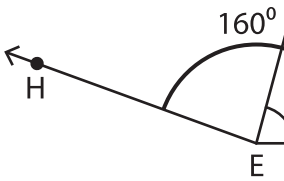
$m\angle ZWX =$  \_\_\_\_\_

2)

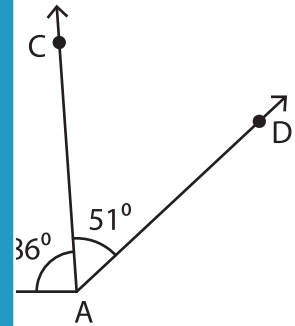


$=$  \_\_\_\_\_

3)

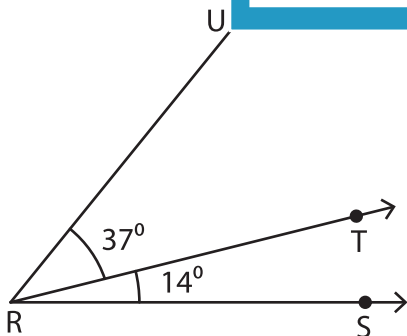


$m\angle HEG =$  \_\_\_\_\_

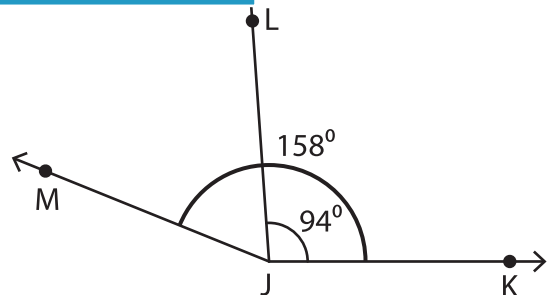


$=$  \_\_\_\_\_

5)



$m\angle URS =$  \_\_\_\_\_



$m\angle MJL =$  \_\_\_\_\_

## PREVIEW

Gain complete access to the largest collection of worksheets in all subjects!

Members, please log in to download this worksheet.

Not a member? Please sign up to gain complete access.

www.mathworksheets4kids.com