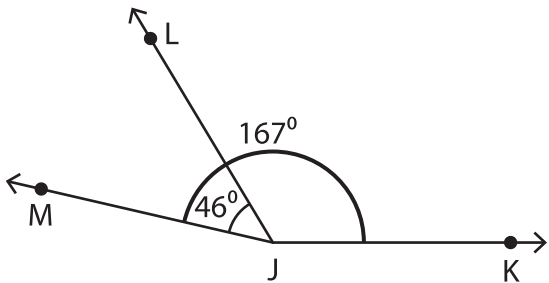


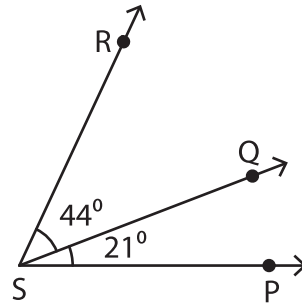
Find the measure of each indicated angle.

1)



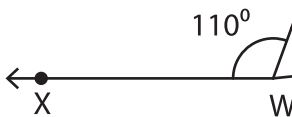
$m\angle LJK =$ _____

2)



$=$ _____

3)



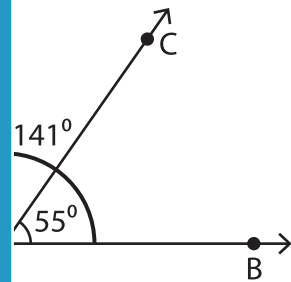
$m\angle XWZ =$ _____

Gain complete access to the largest
collection of worksheets in all subjects!

Members, please
log in to
download this
worksheet.

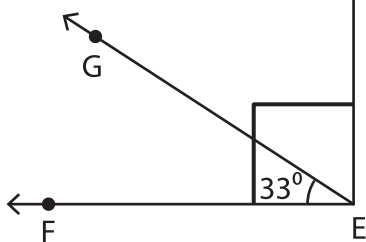
Not a member?
Please sign up to
gain complete
access.

www.mathworksheets4kids.com

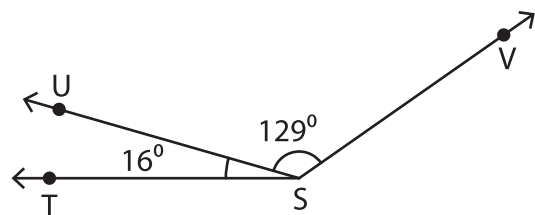


$=$ _____

5)



$m\angle HEG =$ _____



$m\angle VST =$ _____