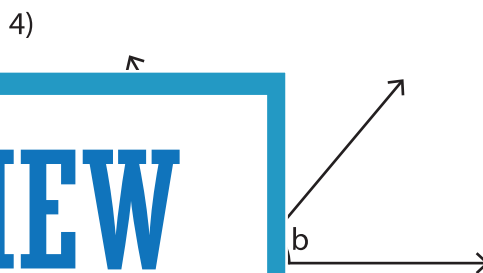
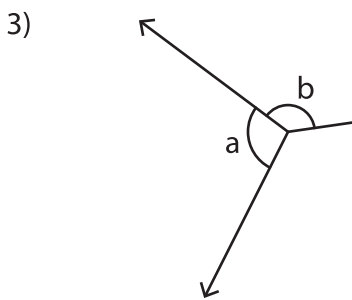
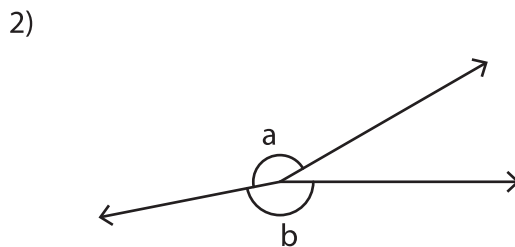
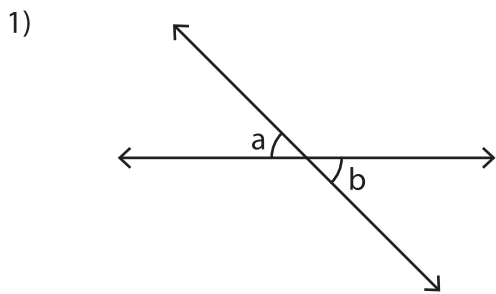
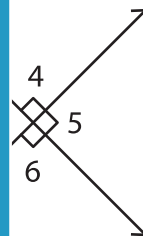
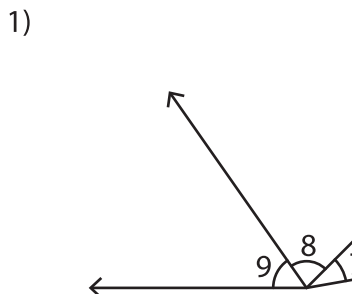


Adjacent Angles

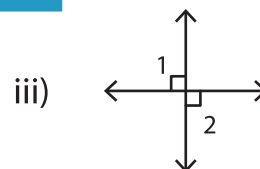
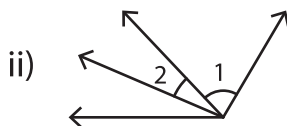
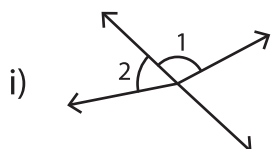
A) State whether the indicated angle pairs are adjacent or not.



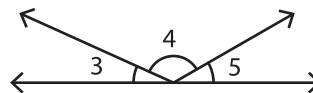
B) Identify the two pairs of adjacent angles.



C) 1) In which of the following pairs of angles are adjacent?



2) Which of the following pairs of angles are adjacent?



i) $\angle 3, \angle 5$

ii) $\angle 4, \angle 5$

iii) $\angle 5, \angle 3$

PREVIEW

Gain complete access to the largest collection of worksheets in all subjects!

Members, please log in to download this worksheet.

Not a member? Please sign up to gain complete access.

www.mathworksheets4kids.com