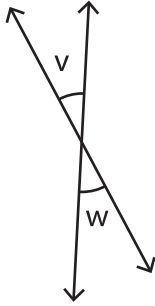


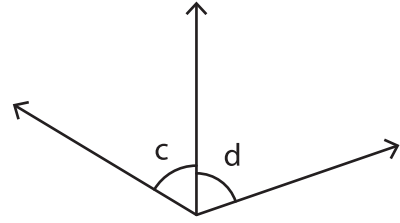
# Identifying Pairs of Angles

Identify the indicated angles as adjacent, vertical, or linear.

1)



2)



3)

## PREVIEW

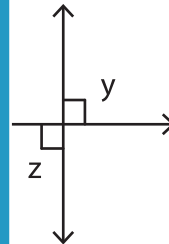
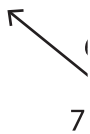
Gain complete access to the largest collection of worksheets in all subjects!

Members, please log in to download this worksheet.

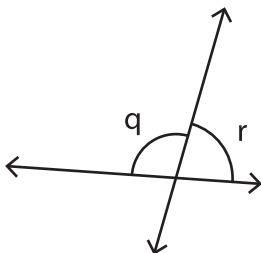
Not a member? Please sign up to gain complete access.

www.mathworksheets4kids.com

5)



7)



8)

