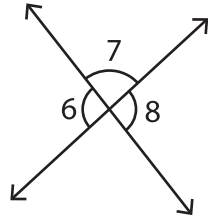


# Linear Pairs

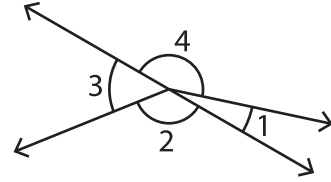
A) Identify all the linear pairs in each figure.

1)



\_\_\_\_\_

2)



\_\_\_\_\_

3)



\_\_\_\_\_

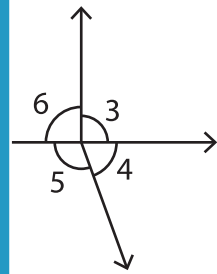
## PREVIEW

Gain complete access to the largest collection of worksheets in all subjects!

Members, please log in to download this worksheet.

Not a member? Please sign up to gain complete access.

[www.mathworksheets4kids.com](http://www.mathworksheets4kids.com)



\_\_\_\_\_

B) Identify the angle

ified angle.

1)  $\angle JOK$  \_\_\_\_\_ or \_\_\_\_\_

2)  $\angle LOM$  \_\_\_\_\_ or \_\_\_\_\_

3)  $\angle QOP$  \_\_\_\_\_ or \_\_\_\_\_

4)  $\angle KOL$  \_\_\_\_\_ or \_\_\_\_\_