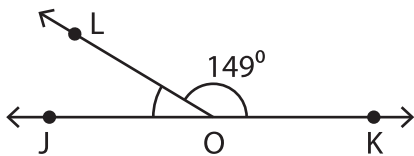


Linear Pairs

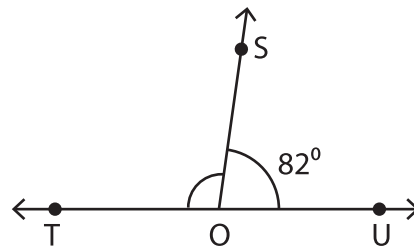
A) Find the measure of the indicated angle in each linear pair.

1)



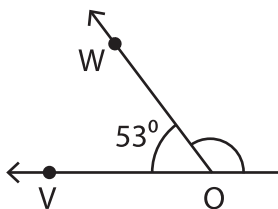
$m\angle JOL =$ _____

2)

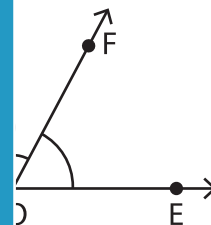


$m\angle TOS =$ _____

3)



$m\angle XOW =$ _____



PREVIEW

Gain complete access to the largest collection of worksheets in all subjects!

Members, please log in to download this worksheet.

Not a member? Please sign up to gain complete access.

www.mathworksheets4kids.com

B) 1) If an angle and its o

asures of the angles?

2) In a linear pair of an
measures of the an

e other, find the

3) If $\angle 1$ and $\angle 2$ are a linear pair of angles and the $m\angle 1 = 87^\circ$, find the $m\angle 2$.
