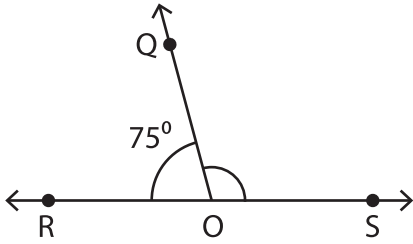


Linear Pairs

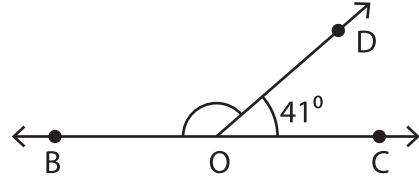
A) Find the measure of the indicated angle in each linear pair.

1)



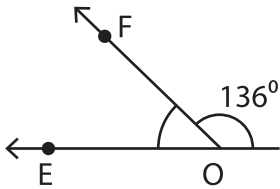
$m\angle SOQ =$ _____

2)

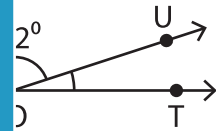


$m\angle BOD =$ _____

3)



$m\angle EOF =$ _____



PREVIEW

Gain complete access to the largest collection of worksheets in all subjects!

Members, please log in to download this worksheet.

Not a member? Please sign up to gain complete access.

www.mathworksheets4kids.com

B) 1) If the difference in the measures of the angles is 10 degrees, find the measures of the angles.

2) If $\angle 6$ and $\angle 7$ are a linear pair, find the measure of $\angle 6$.

3) Two angles form a linear pair. If the measure of one angle is two times the measure of the other, what are the measures of the angles?
