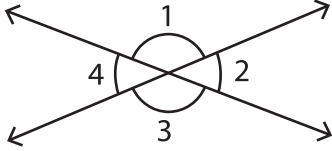


# Intersecting Angles

Find the unknown angle.

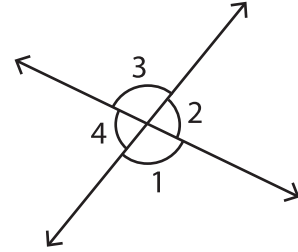
1)



$m\angle 1 = \underline{\hspace{2cm}}$ ,

$m\angle 3 = 136^\circ$ ,

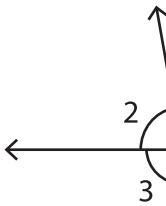
2)



$m\angle 2 = \underline{\hspace{2cm}}$

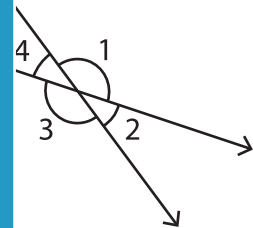
$m\angle 4 = 77^\circ$

3)



$m\angle 1 = \underline{\hspace{2cm}}$ ,

$m\angle 3 = \underline{\hspace{2cm}}$ ,



$m\angle 2 = \underline{\hspace{2cm}}$

$m\angle 4 = \underline{\hspace{2cm}}$

## PREVIEW

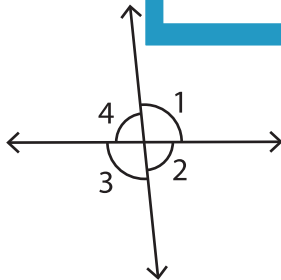
Gain complete access to the largest collection of worksheets in all subjects!

Members, please log in to download this worksheet.

Not a member? Please sign up to gain complete access.

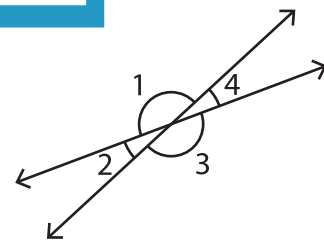
[www.mathworksheets4kids.com](http://www.mathworksheets4kids.com)

5)



$m\angle 1 = \underline{\hspace{2cm}}$ ,  $m\angle 2 = 84^\circ$

$m\angle 3 = \underline{\hspace{2cm}}$ ,  $m\angle 4 = \underline{\hspace{2cm}}$



$m\angle 1 = \underline{\hspace{2cm}}$ ,  $m\angle 2 = 22^\circ$

$m\angle 3 = \underline{\hspace{2cm}}$ ,  $m\angle 4 = \underline{\hspace{2cm}}$