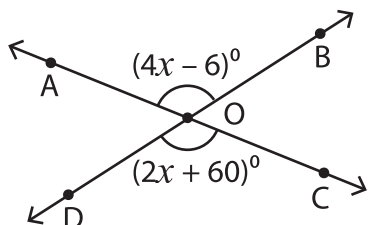


Intersecting Angles

Find the value of x and the indicated angle.

1)

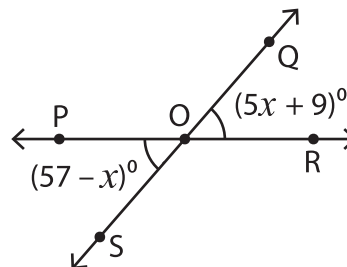


$x =$ _____

$m\angle BOC =$ _____

$m\angle AOB =$ _____

2)



$x =$ _____

$R =$ _____

$R =$ _____

PREVIEW

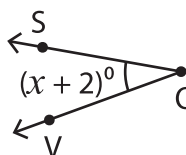
Gain complete access to the largest collection of worksheets in all subjects!

Members, please log in to download this worksheet.

Not a member? Please sign up to gain complete access.

www.mathworksheets4kids.com

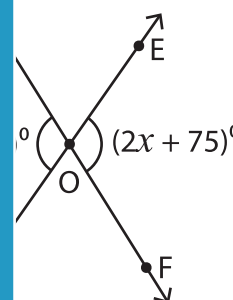
3)



$x =$ _____

$m\angle VOU =$ _____

$m\angle TOU =$ _____

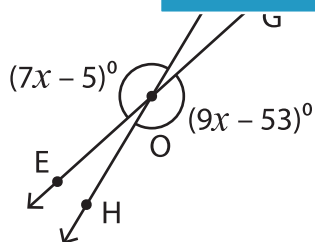


$x =$ _____

$F =$ _____

$D =$ _____

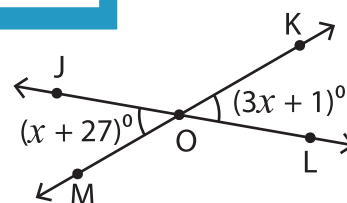
5)



$x =$ _____

$m\angle FOG =$ _____

$m\angle EOF =$ _____



$x =$ _____

$m\angle JOM =$ _____

$m\angle MOL =$ _____