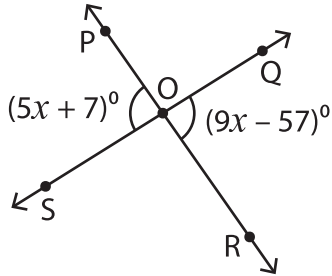


Intersecting Angles

Find the value of x and the indicated angle.

1)

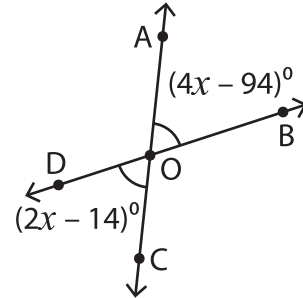


$x =$ _____

$m\angle POS =$ _____

$m\angle POQ =$ _____

2)

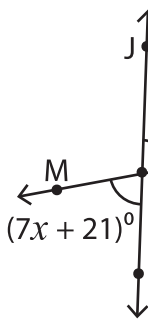


$x =$ _____

$m\angle AOB =$ _____

$m\angle BOC =$ _____

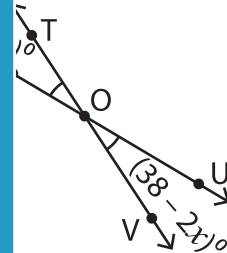
3)



$x =$ _____

$m\angle JOK =$ _____

$m\angle MOJ =$ _____



$x =$ _____

$m\angle TOU =$ _____

$m\angle TUV =$ _____

PREVIEW

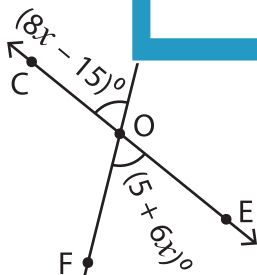
Gain complete access to the largest collection of worksheets in all subjects!

Members, please log in to download this worksheet.

Not a member? Please sign up to gain complete access.

www.mathworksheets4kids.com

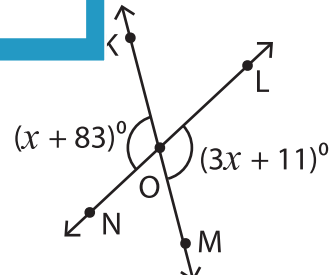
5)



$x =$ _____

$m\angle COD =$ _____

$m\angle DOE =$ _____



$x =$ _____

$m\angle LOM =$ _____

$m\angle NOM =$ _____