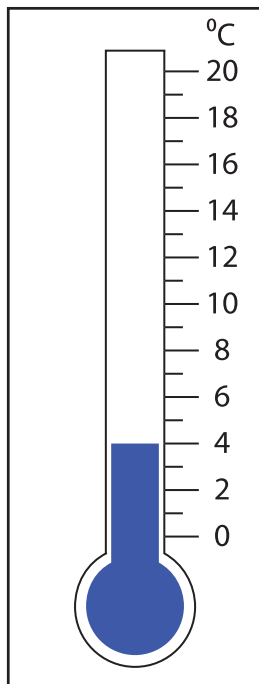


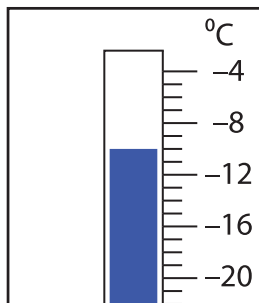
# Adding & Subtracting Temperatures

Find the new reading if the temperature

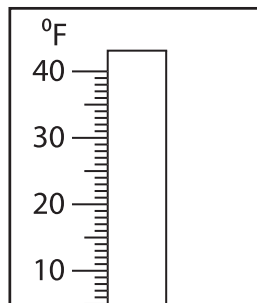
1) rises by  $13^{\circ}\text{C}$ .



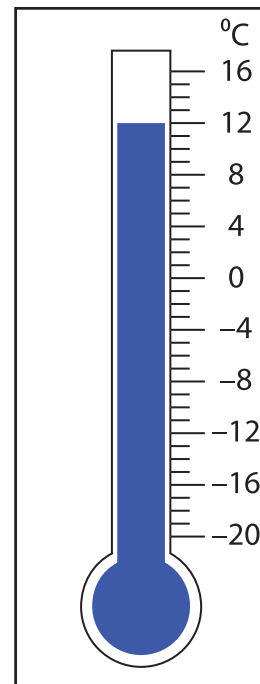
2) falls by  $26^{\circ}\text{C}$ .



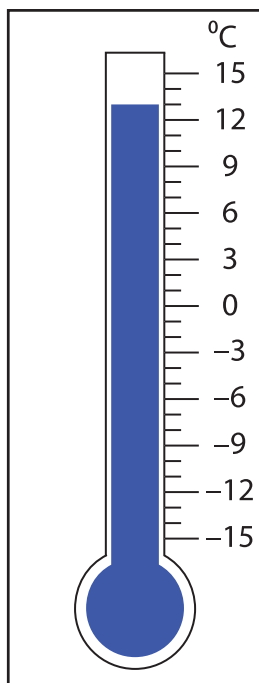
3) rises by  $45^{\circ}\text{F}$ .



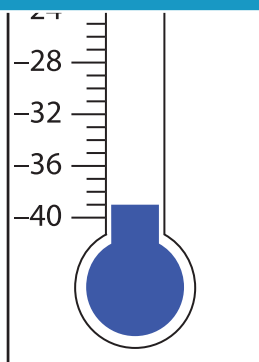
4) falls by  $8^{\circ}\text{C}$ .



5) falls by  $28^{\circ}\text{C}$ .



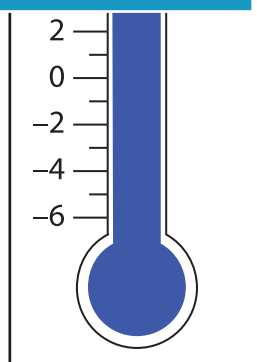
6)



Members, please  
log in to  
download this  
worksheet.

Not a member?  
Please sign up to  
gain complete  
access.

[www.mathworksheets4kids.com](http://www.mathworksheets4kids.com)



8) rises by  $20^{\circ}\text{C}$ .

