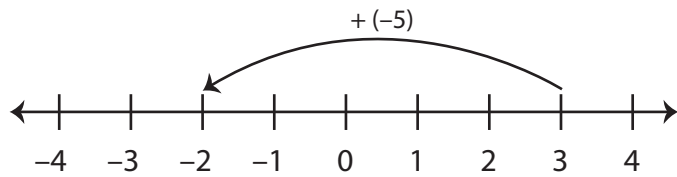


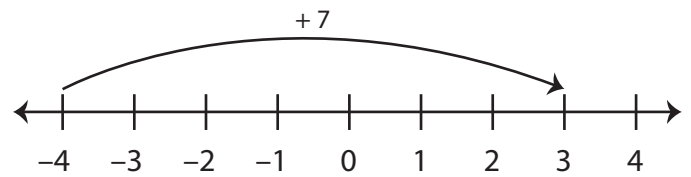
Number Line - Adding Integers

Sheet 3

Example 1: $3 + (-5) = -2$

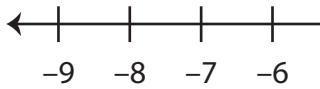


Example 2: $-4 + 7 = 3$

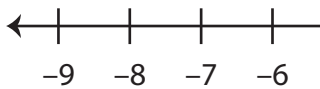


Use the number line to find the sum.

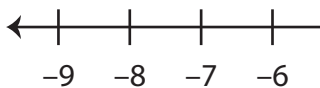
1) $0 + (-8) =$ _____



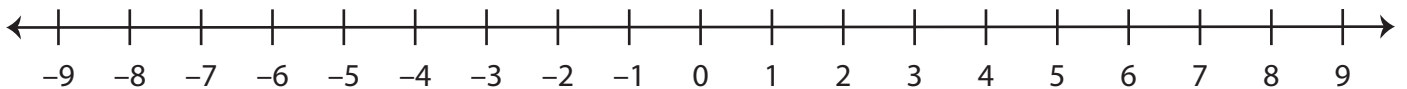
2) $5 + 4 =$ _____



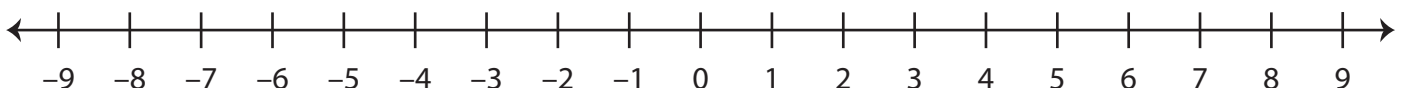
3) $7 + (-9) =$ _____



4) $-6 + 11 =$ _____



5) $-1 + (-6) =$ _____



PREVIEW

Gain complete access to the largest
collection of worksheets in all subjects!

Members, please
log in to
download this
worksheet.

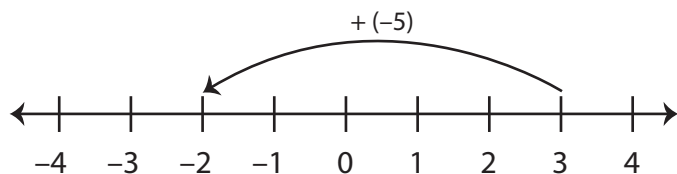
Not a member?
Please sign up to
gain complete
access.

www.mathworksheets4kids.com

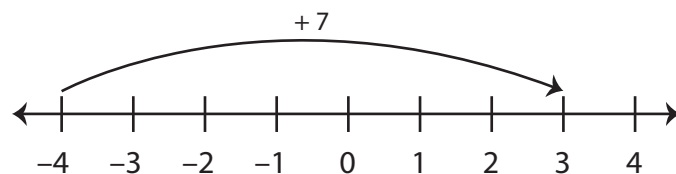
Number Line - Adding Integers

Sheet 3

Example 1: $3 + (-5) = -2$



Example 2: $-4 + 7 = 3$

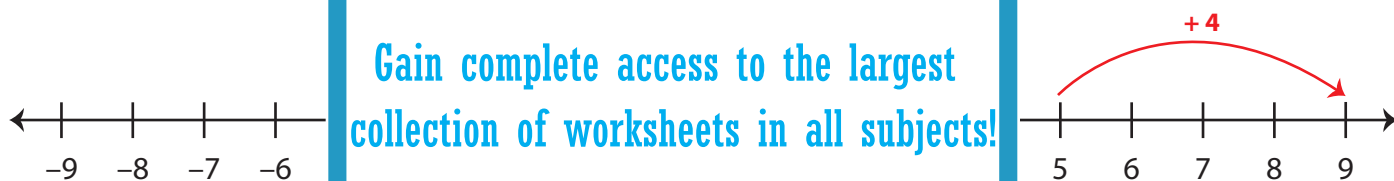


Use the number line to find the sum.

1) $0 + (-8) = \underline{\quad -8 \quad}$



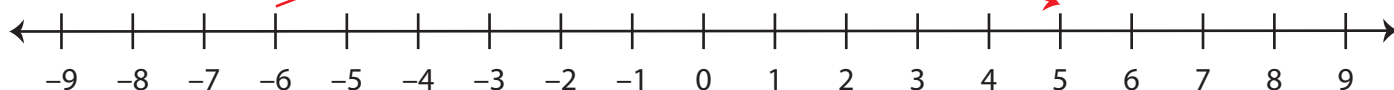
2) $5 + 4 = \underline{\quad 9 \quad}$



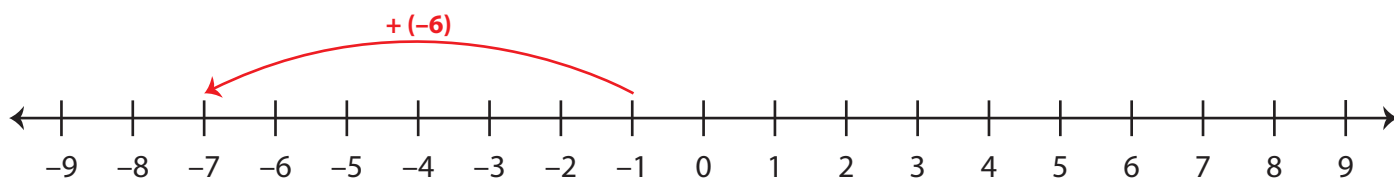
3) $7 + (-9) = \underline{\quad -2 \quad}$



4) $-6 + 11 = \underline{\quad 5 \quad}$



5) $-1 + (-6) = \underline{\quad -7 \quad}$



PREVIEW

Gain complete access to the largest collection of worksheets in all subjects!

Members, please log in to download this worksheet.

Not a member? Please sign up to gain complete access.

www.mathworksheets4kids.com