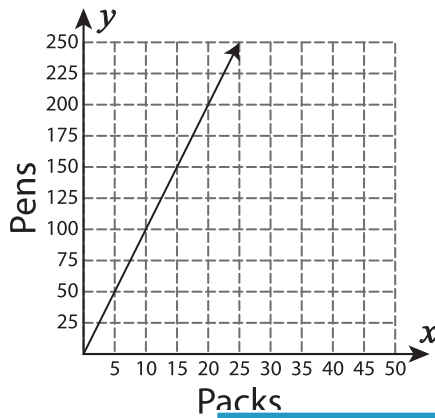
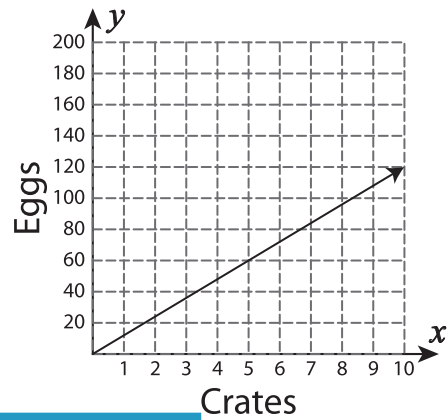


Find the unit rate for each graph.

1)

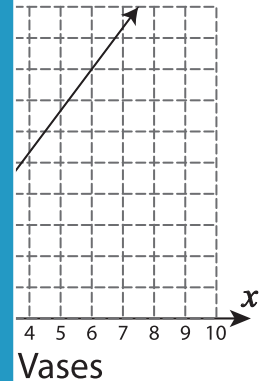
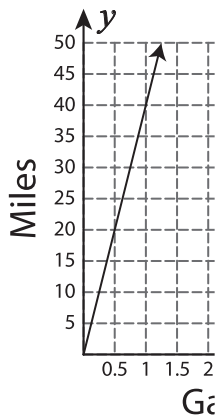


2)



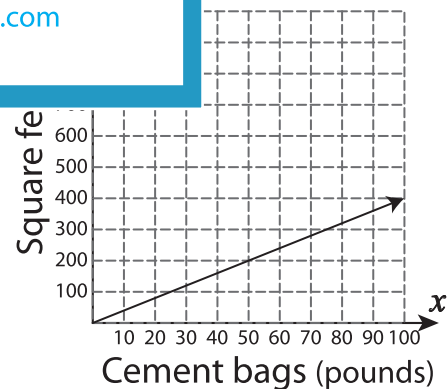
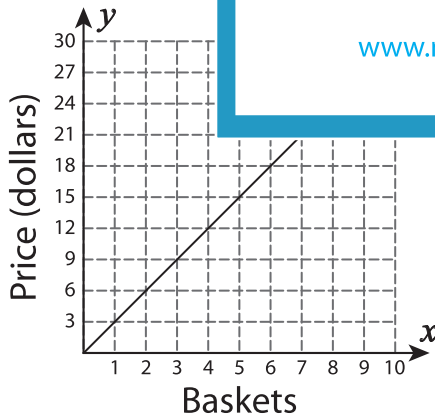
Unit Rate = \_\_\_\_\_

3)



Unit Rate = \_\_\_\_\_

5)



Unit Rate = \_\_\_\_\_

Unit Rate = \_\_\_\_\_

# PREVIEW

Gain complete access to the largest collection of worksheets in all subjects!

Members, please log in to download this worksheet.

Not a member? Please sign up to gain complete access.

[www.mathworksheets4kids.com](http://www.mathworksheets4kids.com)