

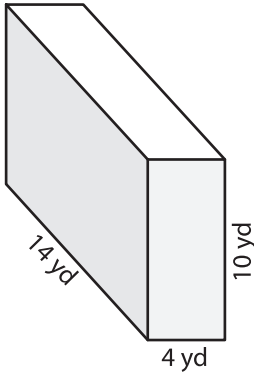
Name: \_\_\_\_\_

## Volume - Prism

Mixed Review: L1ES1

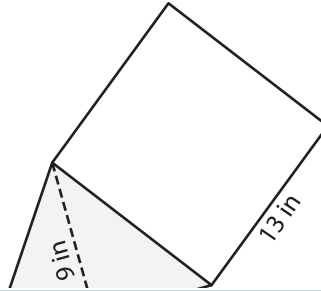
Find the volume of each shape.

1)

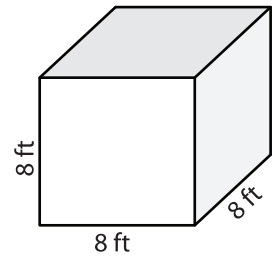


Volume = \_\_\_\_\_

2)

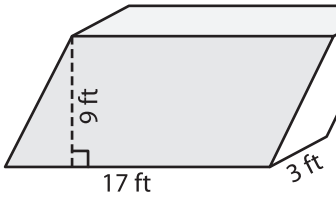


3)



Volume = \_\_\_\_\_

4)



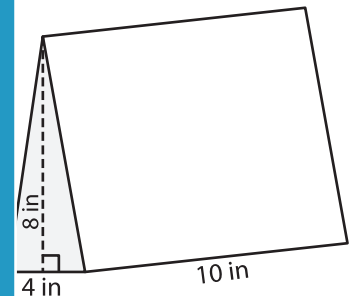
Volume = \_\_\_\_\_

**PREVIEW**  
Gain complete access to the largest collection of worksheets in all subjects!

Members, please log in to download this worksheet.

Not a member? Please sign up to gain complete access.

[www.mathworksheets4kids.com](http://www.mathworksheets4kids.com)



Volume = \_\_\_\_\_

7) The base of a prism is a parallelogram with a base of 12 inches and a height of 6 inches respectively. Find the volume of the prism.

\_\_\_\_\_ and 6 inches respectively.

8) The base of a prism is a trapezoid whose height is 12 yards. The parallel bases of the trapezoid measure 11 yards and 7 yards. If the length of the prism is 2 yards, find its volume.